





4 Esegui le sottrazioni in colonna sul quaderno.

 $18 - 7 = \underline{\quad}$



 $12 - 1 = \underline{\quad}$

$14 - 3 = \underline{\quad}$

 $15 - 2 = \underline{\quad}$

 $17 - 7 = \underline{\quad}$

$11 - 1 = \underline{\quad}$

 $13 - 2 = \underline{\quad}$

$16 - 5 = \underline{\quad}$

$20 - 10 = \underline{\quad}$

**D.**

$19 - 8 = \underline{\quad}$

$15 - 4 = \underline{\quad}$

$16 - 3 = \underline{\quad}$