

Escola _____


Aluno(a): _____

Data: ____/____/____.



Atividade de Matemática


1- Marque com X a quantidade que corresponde a cada conjunto.



3	6
5	4




5	4
3	6




6	5
4	3

2- Ligue a quantidade correspondente:

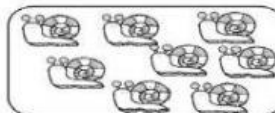
5



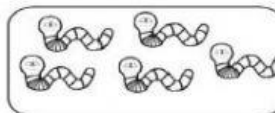
1



4



8



3

