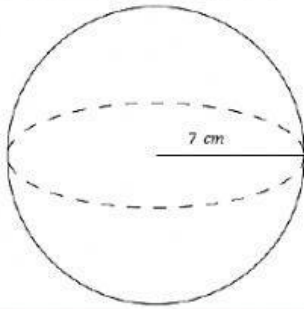


Volume - Spheres

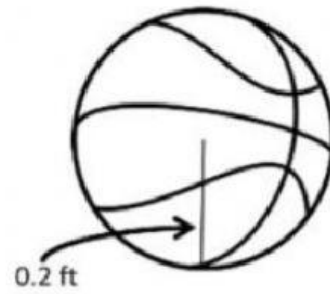
Find the volume of the sphere



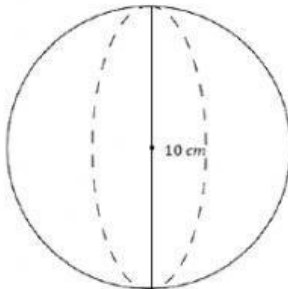
$$V = \frac{4}{3}\pi r^3$$

$V = \underline{\hspace{2cm}}$ $r = \underline{\hspace{2cm}}$

Find the volume of the basketball



Find the volume of the sphere



Find the radius of the soccer ball with volume $288\pi \text{ in}^3$

