







1) **WATER POLLUTION:** Look at these images and...

- a) Classify the following causes of water pollution as **NATURAL** or **HUMAN** caused
 b) Choose the name of each from the chart below.

FLOOD	SEWAGE	ANIMAL WASTE	ACID RAIN	ALGAE	FERTILIZERS
					
a	a	a			
b	b	b			
					
a	a	a			
b	b	b			

2) **FLOW DECREASE IN RIVERS:** Answer TRUE or FALSE



- a) **DAMS** use river water for hydroelectrical purposes _____
 b) **IRRIGATION CHANNELS** "steal" water from rivers for watering crops _____
 c) **SEDIMENT** brings sand and rocks from factories _____
 d) **INDUSTRIES** use millions of water litres for their processes _____
 e) **HUMAN CONSUMPTION** does not affect the level of rivers _____
 f) **DRAUGHT** causes or no precipitation, affecting the level of rivers _____

3) **GLOBAL WARMING:** Complete the following sentences with the correct Word.

The _____ effect causes the atmosphere to retain more heat than necessary, increasing the _____ of the planet. This became a problem after the _____ in the 19th century, when factories started to release _____ to the atmosphere. Today, transportation, use of _____ fuels and wildfires are making the problem worse.

The increase of temperature is called _____, and causes melting of _____, floods, and _____ in areas where water was abundant in the past, making rivers disappear and crops die.

