

Name/Class: _____

Look at the minute and hour hand. Write the angles in between them with **right angle** or **acute angle** or **obtuse angle**.

(a)



(d)



(b)



(e)




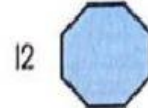
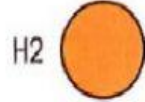
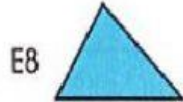

(c)



(f)



Drag and drop the shapes in the correct squares on the grid.



10										
9										
8										
7										
6										
5										
4										
3										
2										
1										
	A	B	C	D	E	F	G	H	I	J