

MATH TEST
FIRST TERM
2021

FIRST GRADE

Teacher's name: Miss Ximena Vargas


NAME: _____


DATE: April 6th


YEAR: 2021

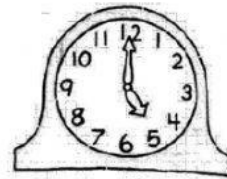
1. Look at each clock. Write the time.

A.

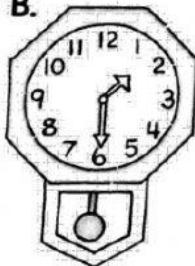











B.

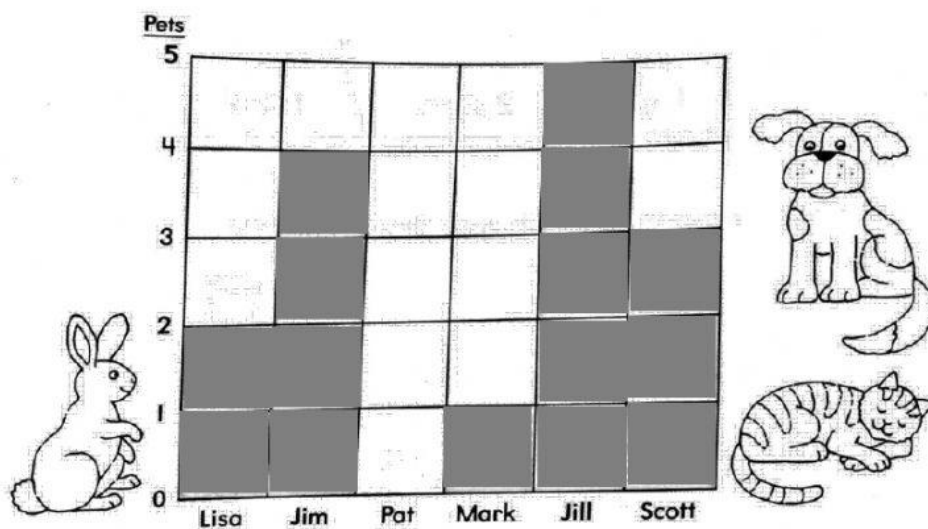








2. Look at the graph. Fill in the answers below.



MATH TEST
FIRST TERM
2021



A. Jim has 4 pets.

Jill has 5 pets.

Jim has less.

B. Lisa has _____ pets.

Scott has _____ pets.

_____ has more.

C. Mark has _____ pet.

Pat has _____ pets.

_____ has more.

D. _____ has 4 pets.

_____ has 3 pets.

_____ has less.

3. Solve the additions.

$$\begin{array}{r} 7 \\ 4 \\ 5 \\ + \underline{4} \end{array} \quad \begin{array}{r} 2 \\ 6 \\ 2 \\ + \underline{3} \end{array} \quad \begin{array}{r} 6 \\ 4 \\ 3 \\ + \underline{1} \end{array} \quad \begin{array}{r} 8 \\ 7 \\ 8 \\ + \underline{4} \end{array}$$

$$\begin{array}{r} 8 \\ 2 \\ 2 \\ + \underline{4} \end{array} \quad \begin{array}{r} 7 \\ 3 \\ 1 \\ + \underline{8} \end{array} \quad \begin{array}{r} 2 \\ 3 \\ 4 \\ + \underline{3} \end{array} \quad \begin{array}{r} 9 \\ 5 \\ 6 \\ + \underline{9} \end{array}$$

4. Solve the subtractions.

$$\begin{array}{r} 13 \\ - \underline{1} \end{array}$$

$$\begin{array}{r} 34 \\ - \underline{3} \end{array}$$

$$\begin{array}{r} 56 \\ - \underline{5} \end{array}$$

$$\begin{array}{r} 37 \\ - \underline{2} \end{array}$$

$$\begin{array}{r} 58 \\ - \underline{9} \end{array}$$

$$\begin{array}{r} 67 \\ - \underline{3} \end{array}$$

5. Solve the problems.

Ben has 5 books about dogs.

He has 4 books about birds.

How many books about dogs and birds does he have in all?

_____  _____ = _____ books

Mary grew 10 flowers in her garden.

She gave 6 flowers to her grandmother.

How many flowers does she have left?

_____  _____ = _____ flowers

Sam had 7 marbles.

He gave 3 marbles to his sister.

How many marbles does he have left?

_____  _____ = _____ marbles

6. Count the money. Write the total amount on each bag.

