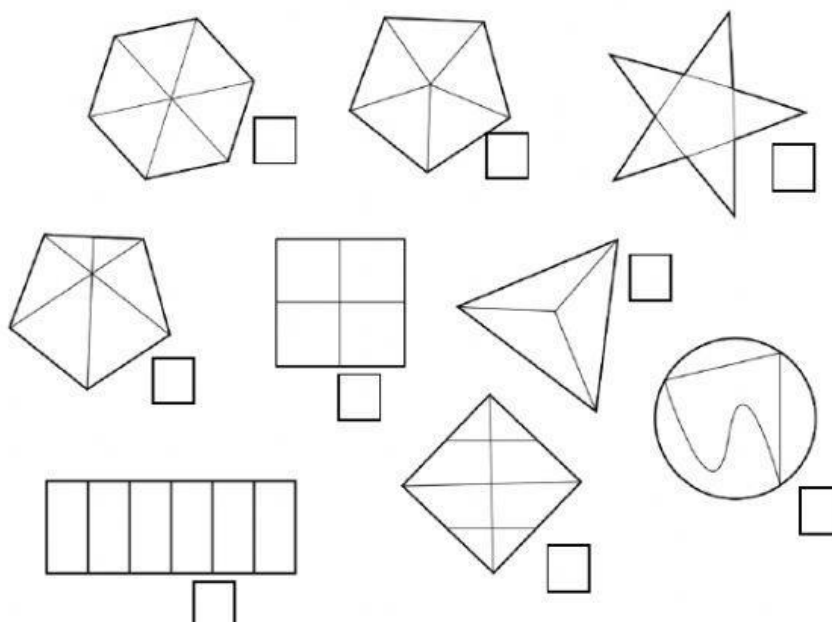


SCRIVI AL POSTO GIUSTO DENOMINATORE, NUMERATORE, LINEA DI FRAZIONE (in stampatello).

4	←	
—	←	
9	←	


INDICA CON UNA X LE FIGURE CHE SONO STATI FRAZIONATE.



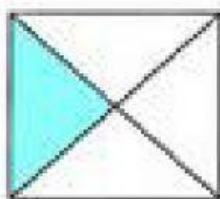
SCRIVI LA FRAZIONE ACCANTO A OGNI FIGURA.

	—		—		—		—
	—		—		—		—


SCEGLI L'UNITÀ FRAZIONARIA CORRETTA.



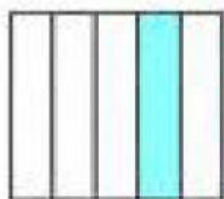
$\frac{1}{2}$ $\frac{1}{3}$ $\frac{1}{4}$




$\frac{1}{2}$ $\frac{1}{3}$ $\frac{1}{4}$




$\frac{1}{6}$ $\frac{1}{4}$ $\frac{1}{5}$



$\frac{1}{5}$ $\frac{1}{3}$ $\frac{1}{6}$



$\frac{1}{2}$ $\frac{1}{4}$ $\frac{1}{6}$



$\frac{1}{3}$ $\frac{1}{5}$ $\frac{1}{8}$

SCRIVI IL VALORE IN NUMERO DECIMALE E IN FRAZIONE COME NELL'ESEMPIO.

	€	Frazione
 	0,55	$\frac{55}{100}$
   	-----	---
 	-----	---
	-----	---
  	-----	---