

## Section A

Circle the correct answers. 40%

*Bulatkan jawapan yang betul.*

1. \_\_\_\_\_ is a non-living thing.  
\_\_\_\_\_ ialah bukan hidupan.

**A** Rose

*Ros*

**B** Horse

*Kuda*

**C** Bread

*Roti*

2. Which are the characteristics of living things?

*Yang manakah ialah ciri-ciri bagi hidupan?*

**I** Need shelters

*Memerlukan tempat*

*perlindungan*

**II** Can breathe

*Boleh bernafas*

**III** Can move

*Boleh bergerak*

**A** I and II

*I dan II*

**B** I and III

*I dan III*

**C** II and III

*II dan III*

3. Which of the following food can give us energy?

*Antara makanan berikut, yang manakah boleh memberikan kita tenaga?*

**A**



**B**



**C**



4. This is a description of a person.

*Ini ialah satu penerangan tentang seseorang.*

• She has no teeth.

*Dia tidak mempunyai gigi.*

• She cannot talk.

*Dia tidak boleh bercakap.*

• She can cry and smile.

*Dia boleh nangis dan senyum.*

She is

*Dia ialah*

**A a girl**

*seorang budak perempuan*

**B a baby**

*seorang bayi*

**C a woman**

*seorang wanita*

5. The picture shows the foods of an animal.

*Gambar ini menunjukkan makanan bagi suatu haiwan.*



Which animal eats the above foods?

*Haiwan yang manakah makan makanan di atas?*

**A Goat**

*Kambing*

**B Giraffe**

*Zirafah*

**C Chicken**

*Ayam*

6.

eggs → Z → butterfly  
*telur → Z → rama-rama*

Z is a

*Z ialah*

**A caterpillar**

*beluncas*

**B tadpole**

*berudu*

**C larva**

*larva*

7.



What will happen to the plant after a week?

*Apakah yang akan berlaku terhadap tumbuhan selepas seminggu?*

**A Wilted**

*Layu*

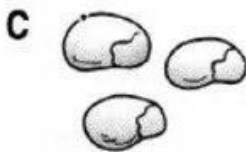
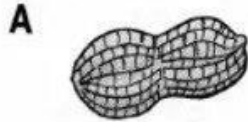
**B Grow well**

*Tumbuh dengan sihat*

**C Not Wilted**

*Tidak layu*

8. Which is the seed of a durian?  
 Yang manakah ialah biji benih durian?



9. Which is taller than humans?  
 Yang manakah lebih tinggi daripada manusia?

A House

Rumah

B Chair

Kerusi

C Cat

Kucing

10.

Object Objek	Length Panjang
X	3 paper clips 3 klip kertas
Y	2 paper clips 2 klip kertas
X	5 paper clips 5 klip kertas

Which object is the shortest?

Objek yang manakah paling pendek?

A Object X

Objek X

B Object Y

Objek Y

C Object Z

Objek Z

11. A \_\_\_\_\_ supplies electricity.  
 \_\_\_\_\_ membekalkan elektrik.

A battery

Bateri

B bulb

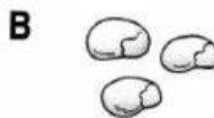
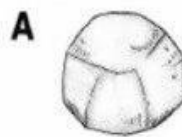
Mentol

C wire

Wayar

12. Which of the following objects can be used as non-standard measuring tool?

Antara objek berikut, yang manakah boleh digunakan sebagai alat pengukur bukan piawai?



13. Which objects use batteries to function?

*Objek yang manakah menggunakan bateri untuk berfungsi?*

I Clock

*Jam*

II Radio

*Radio*

III Pencil box

*Kotak pensel*

A I and II

*I dan II*

B I and III

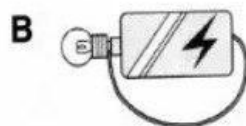

*I dan III*

C II and III

*II dan III*

14. All the following bulbs will light on **except**

*Mentol berikut akan menyala, kecuali*



15. \_\_\_\_\_ can dissolve in water.

\_\_\_\_\_ boleh larut dalam air.

A Sugar

*Gula*

B Sponge

*Span*

C Tissue paper

*Kertas tisu*

16. Which is matched correctly?

*Antara berikut, yang manakah dipadankan dengan betul?*

K Baking powder – can dissolve

*Serbuk penaik – boleh larut*

L Tea – cannot dissolve

*Teh – tidak larut*

M Salt – can dissolve

*Garam – boleh larut*

A K and L

*K dan L*

B K and M

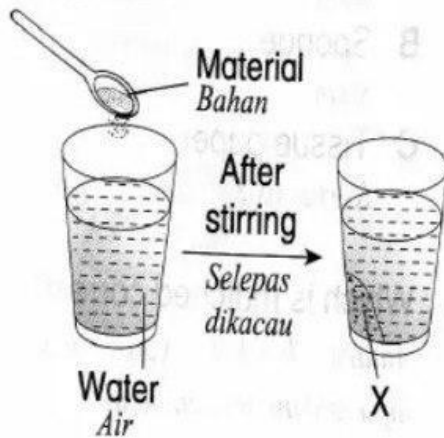
*K dan M*

C L and M

*L dan M*

17. The picture below shows an experiment.

*Gambar berikut menunjukkan suatu eksperimen.*



X is

*X ialah*

**A** filter

*turas*

**B** water

*air*

**C** residue

*baki*

18. Which is a pulling action?

*Yang manakah ialah aksi menarik?*

**A** Bend


*Membengkok*

**B** Stretch

*Meregang*

**C** Squeeze

*Memicit*



This is a \_\_\_\_\_ action.

*Ini ialah suatu aksi \_\_\_\_\_.*

**A** pull

*menarik*

**B** push

*menolak*

**C** pushing and pulling

*menolak dan menarik*

20. If we push the ball harder, it will

*Jika kita menolak bola dengan lebih kuat, ia akan*

**A** move faster

*bergerak lebih cepat*

**B** stop moving

*henti bergerak*

**C** move slower

*bergerak lebih perlahan*









**Section B**

Answer all questions. **60%**

Jawab semua soalan.

1. Put 'L' for the living things and put 'N' for the non-living things. (16%)

Letakkan 'L' bagi hidupan dan letakkan 'N' bagi bukan hidup.



2. Complete the table below with the correct answers. ( 24% )

Lengkapkan jadual berikut dengan jawapan yang betul.



Meat

Daging



Vegetable

Sayur



Bread

Roti



Soya beans

Kacang soya



Noodles

Mi



Apple

Epal

**Food that gives us energy**

*Makanan yang memberikan kita tenaga*


**Food that helps us to stay healthy**





*Makanan yang membantu kita mengekalkan kesihatan*


**Food that helps us to grow**

*Makanan yang membantu kita membesar*


3. Put a tick (✓) for the correct answers. (4%)

Tandakan (✓) bagi jawapan yang betul.

<b>Animal</b> <i>Haiwan</i>	<b>Eats plants</b> <i>Makan tumbuhan</i>	<b>Eats animals</b> <i>Makan haiwan</i>	<b>Eats plants and other animals</b> <i>Makan tumbuh-tumbuhan dan haiwan lain</i>
 <b>Duck</b> <i>Itik</i>			
 <b>Zebra</b> <i>Zebra</i>			
 <b>Crocodile</b> <i>Buaya</i>			
 <b>Butterfly</b> <i>Rama-rama</i>			

4. Circle the correct answers. (16%)

Bulatkan jawapan yang betul.

<p>a</p> 	<p>e</p> 		
<p>can dissolve <i>boleh larut</i></p>	<p>cannot dissolve <i>tidak boleh larut</i></p>	<p>push <i>tolak</i></p>	<p>pull <i>tarik</i></p>
<p>b</p> 	<p>f</p> 		
<p>can dissolve <i>boleh larut</i></p>	<p>cannot dissolve <i>tidak boleh larut</i></p>	<p>push <i>tolak</i></p>	<p>pull <i>tarik</i></p>
<p>c</p> 	<p>g</p> 		
<p>can dissolve <i>boleh larut</i></p>	<p>cannot dissolve <i>tidak boleh larut</i></p>	<p>squeeze <i>memicit</i></p>	<p>press <i>menekan</i></p>
<p>d</p> 	<p>h</p> 		
<p>bend <i>membengkok</i></p>	<p>stretch <i>meregang</i></p>	<p>twist <i>memulas</i></p>	<p>knock <i>mengetuk</i></p>