


Date:



Lesson:

Full name:


Exercise 1: Count and circle the correct number.




1 2 3



3 4 5



6 7 8




8 9 10




Exercise 2: Match the number to the correct group of objects.



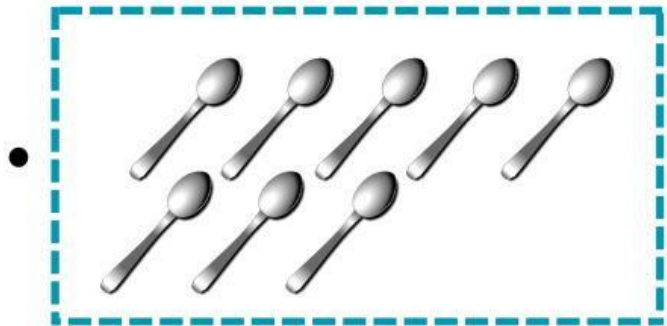
9.




6.



5.




8.





Exercise 3: Fill in each blank with one number.

a) How many fish are there in all?



There are ____ fish in all.

b) How many eggs are there in all?



There are ____ eggs in all.

c) How many bottles are there in all?




There are ____ bottles in all.





Exercise 4: Tick TRUE or FALSE.

a)



There are 7 flowers in all.

True

False

b)



There are 4 crayons in all.

True

False

c)



There are 9 bees in all.

True

False

