

Name:

Date:





Sebutkan
NAMA BILANGAN
DIBAWAH INI





PENJUMLAHAN BERSUSUN




$$\begin{array}{r} 100 \\ 101 \\ \hline \end{array} +$$



$$\begin{array}{r} 198 \\ 125 \\ \hline \end{array} +$$



$$\begin{array}{r} 185 \\ 157 \\ \hline \end{array} +$$


$$\begin{array}{r} 123 \\ 356 \\ \hline \end{array} +$$


$$\begin{array}{r} 281 \\ 417 \\ \hline \end{array} +$$


$$\begin{array}{r} 567 \\ 348 \\ \hline \end{array} +$$


$$\begin{array}{r} 596 \\ 147 \\ \hline \end{array} +$$


$$\begin{array}{r} 327 \\ 286 \\ \hline \end{array} +$$


$$\begin{array}{r} 28 \\ 15 \\ \hline \end{array} +$$
