

Nama : \_\_\_\_\_

Tarikh : \_\_\_\_\_

Kelas : \_\_\_\_\_


**a) TAMBAH DALAM LINGKUNGAN 100** (tanpa mengumpul semula)

Arahan : Selesaikan dan warnakan jawapan yang betul.

$$82 + 15 = \underline{\quad}$$



$$90 + 10 = \underline{\quad}$$




$$13 + 15 = \underline{\quad}$$




$$26 + 21 = \underline{\quad}$$



$$85 + 11 = \underline{\quad}$$



$$66 + 22 = \underline{\quad}$$



$$79 + 20 = \underline{\quad}$$



$$47 + 32 = \underline{\quad}$$





Warnakan nilai tempat yang betul bagi nombor yang bergaris.

