



# Bài 7


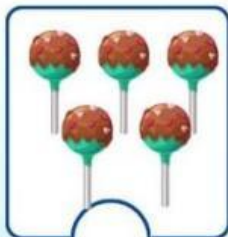



Bé hoàn thành

## GỘP NHÓM SỐ LƯỢNG TRONG PHẠM VI 10



Điền số thích hợp vào ô trống:



1		3						
---	--	---	--	--	--	--	--	--