

Họ và tên: .....



Ngày .... tháng .... năm 202...

### 1. Số?

$1 + 1 = \dots$

$1 + 4 = \dots$

$\dots + 1 = 2$

$\dots + 3 = 5$

$1 + 2 = \dots$

$4 + 1 = \dots$

$1 + \dots = 3$

$3 + \dots = 5$

$2 + 1 = \dots$

$2 + 3 = \dots$

$\dots + 1 = 3$

$1 + \dots = 6$

$1 + 3 = \dots$

$3 + 2 = \dots$

$1 + \dots = 4$

$\dots + 1 = 6$

$3 + 1 = \dots$

$1 + 5 = \dots$

$\dots + 1 = 4$

$2 + \dots = 6$

$2 + 2 = \dots$

$5 + 1 = \dots$

$2 + \dots = 4$

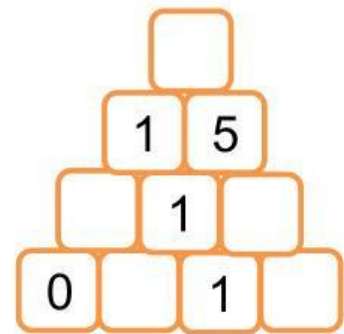
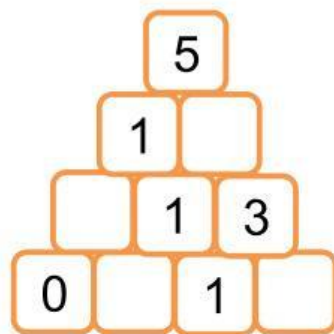
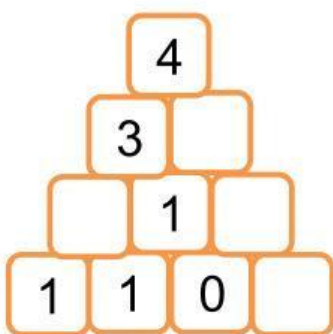
$\dots + 2 = 6$

### 2. Số?

5	
0	5
5	
2	
4	
1	
3	

6	
3	
5	
1	
6	
2	
4	

### 3. Số?



### 3. Số?

$$\text{❄️} + \text{❄️} = 4$$

$$\text{☃️} + \text{☃️} = 6$$

$$\text{🎄} + \text{❄️} = 8$$

$$\text{🎄} + \text{☃️} = 10$$

$$\text{🎁} - \text{🎄} = 2$$

$$\text{🎄} - \text{🏠} = 3$$

$$\text{❄️} + \text{🎁} = ?$$

$$\text{🏠} + \text{☃️} = ?$$

### 4. Số?

7	+		=	9
---	---	--	---	---

+

2

=

2	+		=	6
---	---	--	---	---

+

	+	4	=	7
--	---	---	---	---

+

=

	+	3	=	4
--	---	---	---	---

=

	+	8	=	9
--	---	---	---	---

+

	+	5	=	8
--	---	---	---	---

=

	+		=	10
--	---	--	---	----