


Quiz 2 Review
1st PERIOD
2026 – 2027

Student:			
Grade:	4th	Section:	A - B
Subject:	DIGITAL SKILLS & LAB SKILLS	Date:	
Teacher:	Lcda Estefania Orozco		

1. Drag and Drop the steps into the right order to make the juice drink

Step 1	Step 2	Step 3
		
Step 4	Step 5	Step 6



2. Make decisions based on the chart:

	Henry	Sakura	Felix	Niko
Monday	✗	✓	✓	✗
Tuesday	✗	✓	✓	✓
Wednesday	✗	✓	✓	✗
Thursday	✗	✓	✓	✓
Friday	✗	✗	✓	✓

Can Felix come on any day?

Yes

No

Can Niko come on Wednesday?

Yes

No

Can Sakura come on Friday?

Yes

No

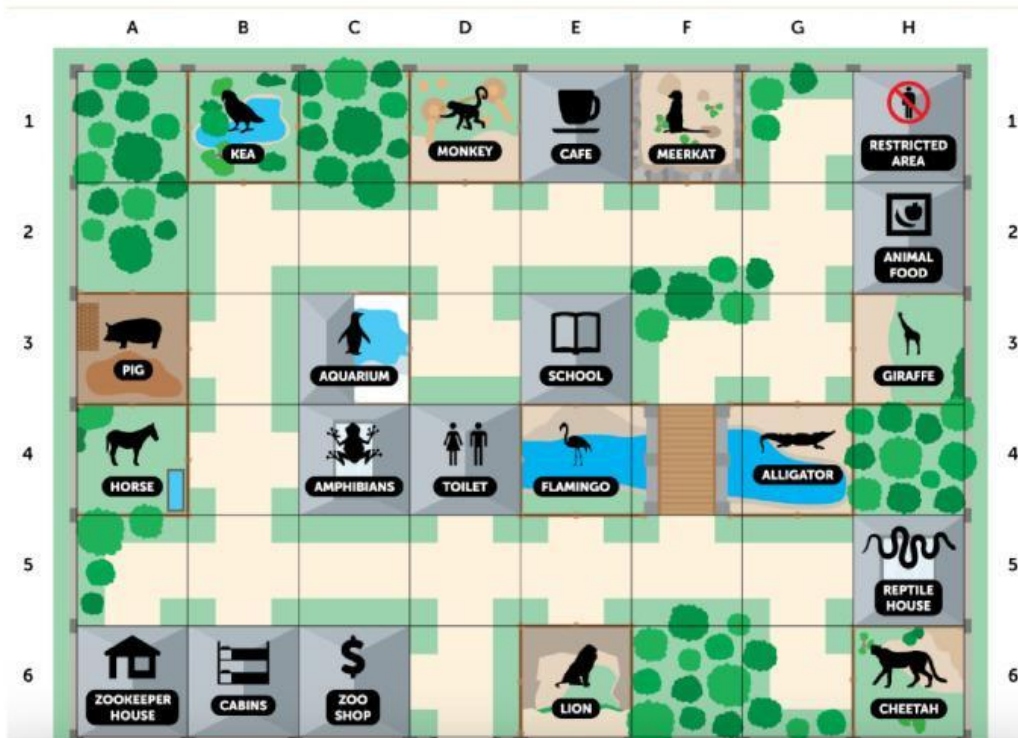
3. Select the 1 thing to take if it is RAINING



4. Select the 2 things to take if it is COLD



5. Choose the option. Use the grid to find the positions



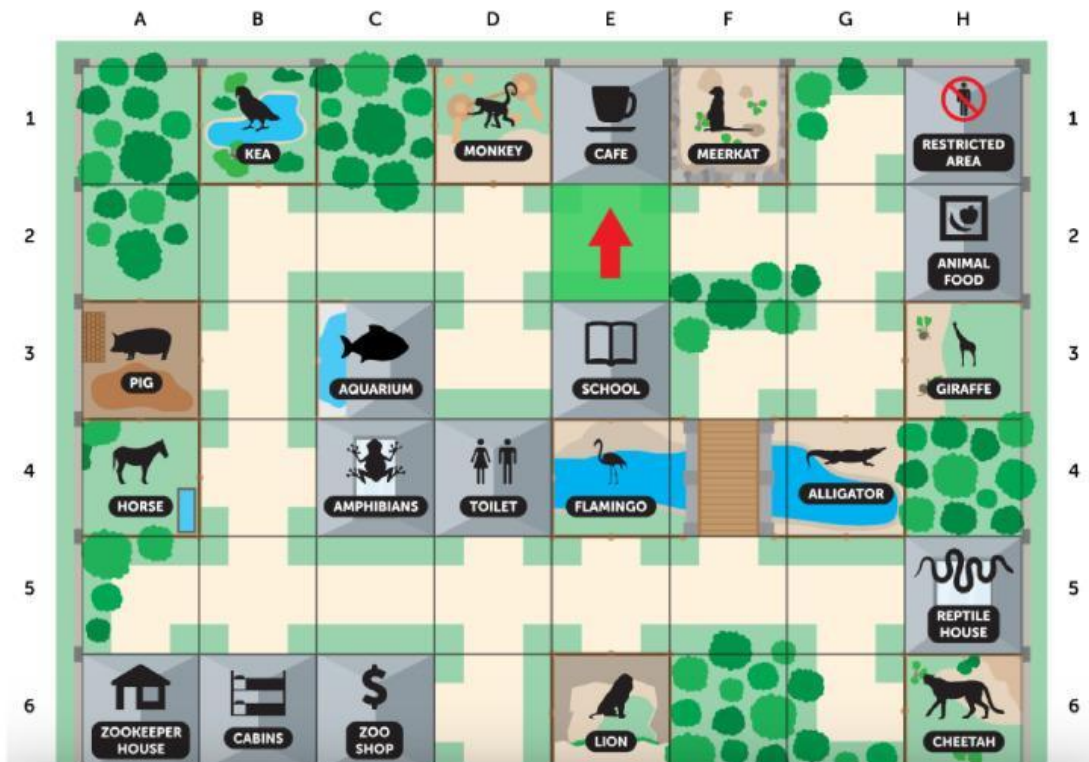
What is in square E3?

- a) Trees
- b) Front gates
- c) Flamingos
- d) Zoo School

What is in square F4?

- a) Bridge
- b) Flamingos
- c) Toilet
- d) Alligators

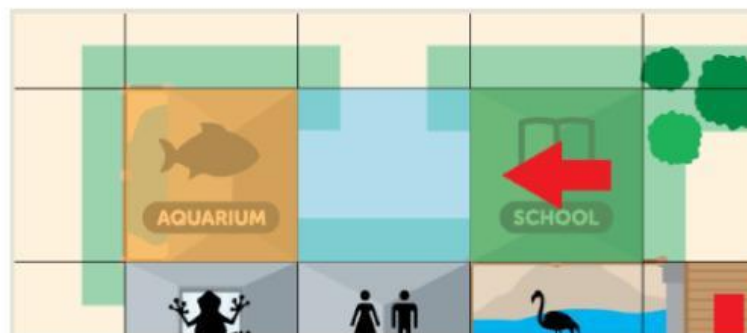
6. You are the Red arrow. Use the grid to find the positions



What is in the **NORTH**?

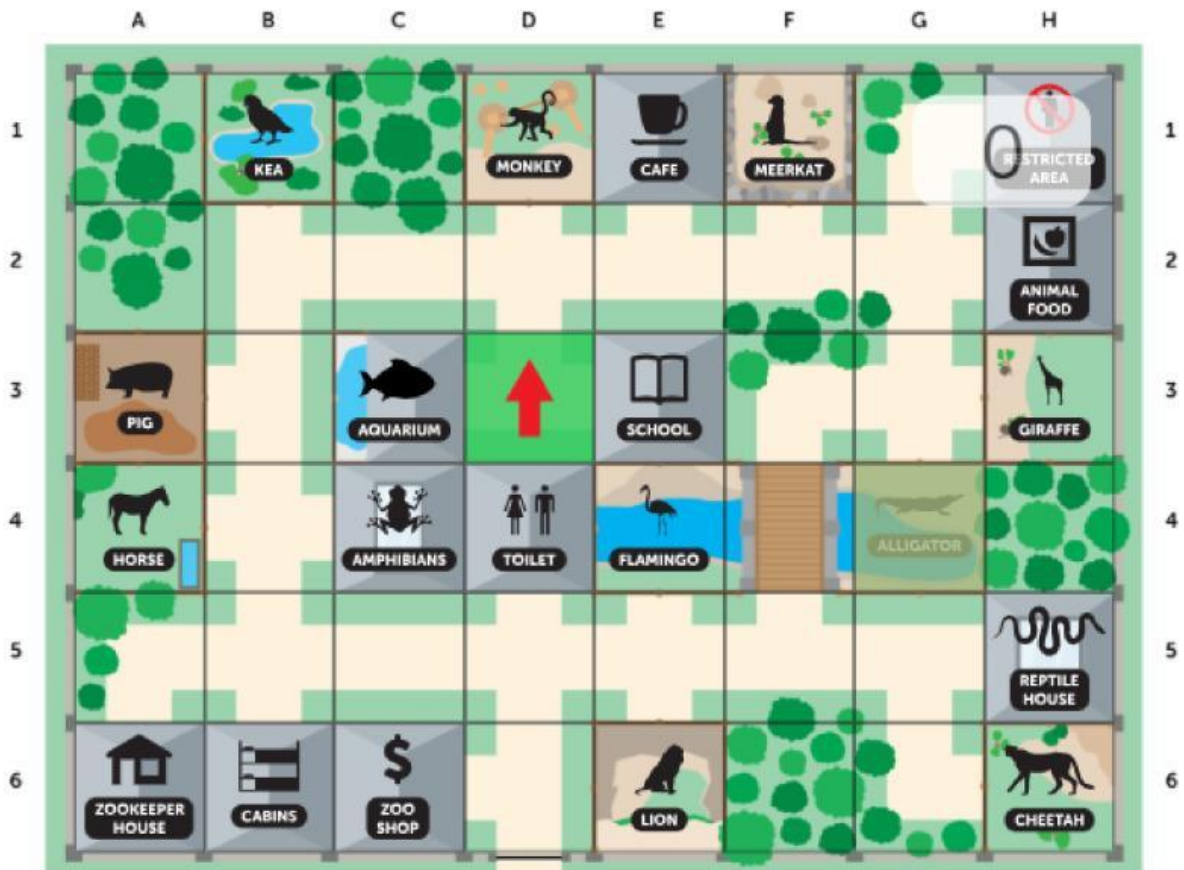
- a) Pig
- b) Cafe
- c) Lion
- d) Giraffe

7. Choose the instruction that tell how to move to the aquarium



- East 2
- Up 2
- Right 2
- Forward 2

8. You are facing **NORTH**. Click the squares to pass to move to the giraffes and alligators.



9. Select the 3 commands needed for this algorithm



Forward 1

Clockwise quarter turn

Forward 4

Anti-clockwise quarter turn

10. Charlie is facing **WEST**. Click on all the squares he will pass before ending in front of the KEA in square B1.

