

Name:	متوسطة الشهيد معروف سعد الرسميه	
Grade 1 (A+B)- Math		Duration: 60 min
Final Exam- دوام بعد الظهر	Teacher: Lina Zein	Note: /20

Exercise: I

1. Match each word with the appropriate number

Twenty – seven 51

Fifty – one 68

Sixty – eight 34

Thirty-four 27

2. Arrange the following numbers from greatest to smallest:

30

68

29

71

Exercise: II

1. Fill in the place value chart

Three place value charts are shown, each with a cartoon sheep character. The first chart has the number 26 in a circle next to it. The second chart has the number 52 in a circle next to it. The third chart has the number 47 in a circle next to it. Each chart has two columns labeled 'Tens' and 'Ones'.

2. Write the numbers that is comes before or after.

72

37

74

35

Two groups of three children are shown. The first group has three children holding signs; the middle sign says 36. The second group has three children holding signs; the middle sign says 73.

4. Choose the greatest number:

a- 16 26 36

b- 22 34 56

c- 63 61 67
 □ □ □

5. Choose the smallest number:

a- 54 26 53
 □ □ □

b- 25 65 64
 □ □ □

c- 31 33 35
 □ □ □


Exercise: III

1. Add:

$$\boxed{3} + \boxed{2} = \boxed{}$$

$$\boxed{5} + \boxed{5} = \boxed{}$$


2. Subtract:



$$\boxed{5} - \boxed{2} = \boxed{}$$



$$\boxed{8} - \boxed{3} = \boxed{}$$



$$\boxed{8} - \boxed{1} = \boxed{}$$



$$\boxed{9} - \boxed{1} = \boxed{}$$





$$\boxed{6} - \boxed{4} = \boxed{}$$



$$\boxed{8} - \boxed{2} = \boxed{}$$

Problem:

There are 25  parrots were sitting on the fence. 30 more  parrots came to join them. How many parrots are sitting on the fence in total?

$$\square + \square = \square$$

