








Match the Clock

Name: _____

Draw a line to connect the matching times.

| | | | |
|--|---|---|-------|
|  | ● | ● | 12:00 |
|  | ● | ● | 9:00 |
|  | ● | ● | 7:00 |
|  | ● | ● | 1:00 |
|  | ● | ● | 6:00 |
|  | ● | ● | 11:00 |
|  | ● | ● | 12:00 |