

E-LKPD BERBASIS LIVE WORKSHEET

MATEMATIKA

SATUAN PENGUKURAN



NAMA: _____

ABSEN: _____

Ni Putu Vivin Valentina
2311031052

Nama :


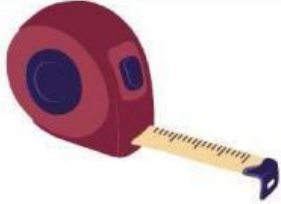
Kelas :

Pengukuran Panjang Benda

Berilah tanda centang untuk benda yang tepat diukur dengan meteran!

<input type="checkbox"/>	Lemari	<input type="checkbox"/>	Jendela
<input type="checkbox"/>	Buku Tulis	<input type="checkbox"/>	Papan Tulis
<input type="checkbox"/>	Pintu	<input type="checkbox"/>	Pagar
<input type="checkbox"/>	Pensil	<input type="checkbox"/>	Sendok
<input type="checkbox"/>	Meja	<input type="checkbox"/>	Dinding

Hubungkan alat ukur yang tepat untuk mengukur benda berikut dengan menarik garis lurus!

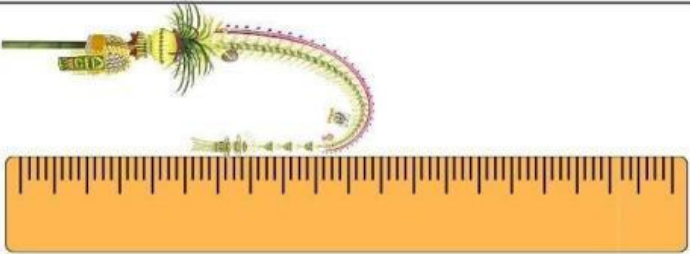

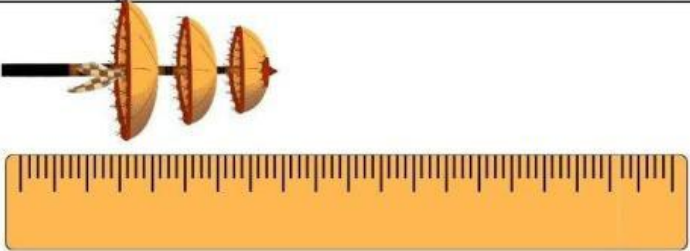

Buku Tulis	<input type="checkbox"/>	<input type="checkbox"/>	
Pintu	<input type="checkbox"/>	<input type="checkbox"/>	
Pensil	<input type="checkbox"/>	<input type="checkbox"/>	
Buku	<input type="checkbox"/>	<input type="checkbox"/>	
Lemari	<input type="checkbox"/>	<input type="checkbox"/>	

Nama :

Kelas :

MENGUKUR BENDA

Ukur panjang benda di bawah ini dan tuliskan hasilnya pada tabel di sebelahnya.

Pengukuran panjang benda	Satuan baku
 A colorful caterpillar with a yellow body and purple and green stripes is positioned above a yellow ruler. The caterpillar's body is curved, and its head is at the 0 mark of the ruler. The ruler is marked in centimeters.	_____ cm
 A single green leaf is positioned above a yellow ruler. The leaf is oriented horizontally, and its stem is at the 0 mark of the ruler. The ruler is marked in centimeters.	_____ cm
 A small insect with a black body and three brown wings is positioned above a yellow ruler. The insect is oriented horizontally, and its body is at the 0 mark of the ruler. The ruler is marked in centimeters.	_____ cm
 A caterpillar with a yellow body and black and white stripes is positioned above a yellow ruler. The caterpillar is oriented horizontally, and its head is at the 0 mark of the ruler. The ruler is marked in centimeters.	_____ cm