

Name :

Ratio

①



The ratio of  to  is _____



②



The ratio of  to  is _____

③



The ratio of  to  is _____

④



The ratio of  to  is _____

Name :

Ratio

Answers

①




The ratio of  to  is 3:2



②



The ratio of  to  is 5:2

③



The ratio of  to  is 1:2

④



The ratio of  to  is 1:1