

CAMBRIDGE PRIMARY SCIENCE 1

Unit 3. Check the progress

Name: _____

Date: _____

Class: _____

- 1 Draw lines to match the pictures with the materials.
One has been done for you.



glass

rock

wood

paper

plastic

fabric

metal


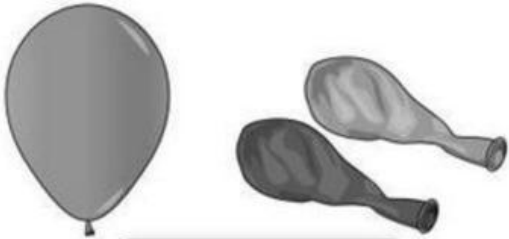



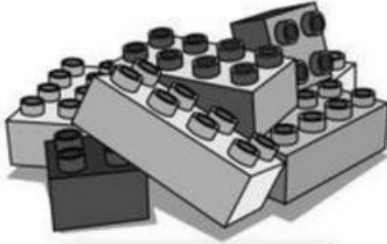


2 What materials are these things made of?

Use these words to help you.



One has been done for you.

 <p>metal</p>	 <p>a <input type="text"/></p>
 <p>b <input type="text"/></p>	 <p>c <input type="text"/></p>
 <p>d <input type="text"/></p>	 <p>e <input type="text"/></p>