

Cambridge Primary Mathematics 1

SETS


Name: _____

Date: _____

Class: _____

Part 1.

Look at the bears.

How many  bears are there?



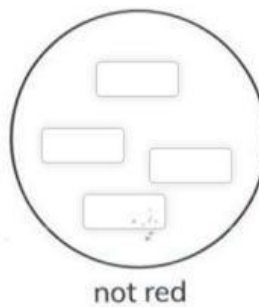

How many other bears are there?

Draw a ring around the correct answer.

There are more / fewer  bears than other bears.

Part 2.

Sort these vegetables into the 2 sets by writing the letters in the correct circle.



How many are red?

How many are not red?

Part 3. Label these sets.

