

CAMBRIDGE PRIMARY MATHEMATICS 1
MEASURES

Name: _____

Date: _____

Class: _____

Let's learn

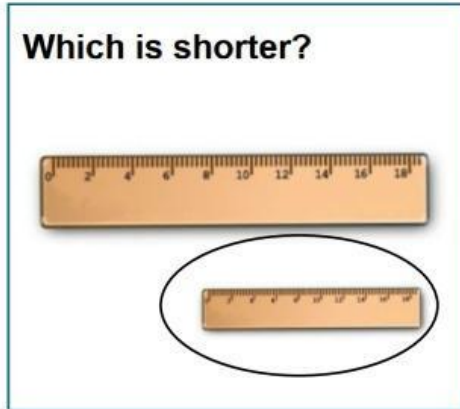
The 'Let's learn' section contains two groups of illustrations. The first group shows pencils: two short pencils labeled 'shorter', one long pencil labeled 'longest', and one very short pencil labeled 'shortest'. The second group shows people: two children, one taller than the other, and a family of four (father, mother, child, and baby) where the father is the tallest and the baby is the shortest.

The bottom section illustrates weight concepts. On the left, a balance scale is tilted with the left pan lower, labeled 'heavier' and the right pan higher, labeled 'lighter'. Below it is a simple square labeled 'light'. On the right, a balance scale is perfectly level, labeled 'balanced'. Below it is a muscular shopping bag with a face, labeled 'heavy'.

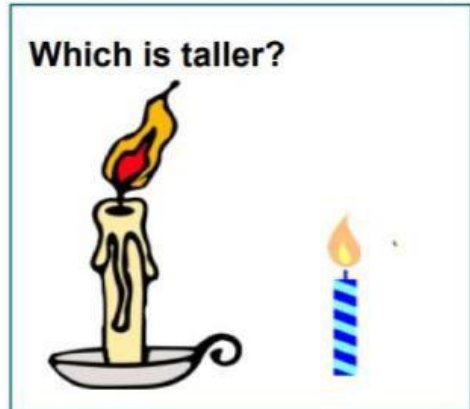


1. Look and choose.


a.



b.




c.



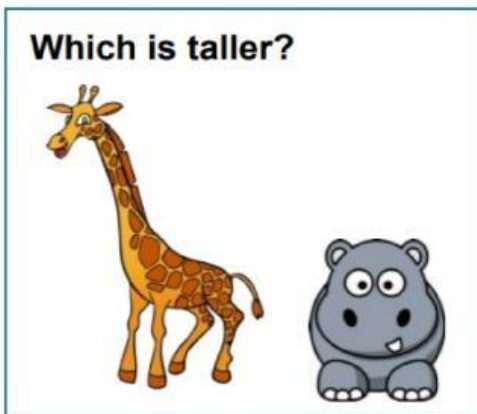
d.



e.




f.




2. Read, look and tick (✓).

1)




Heavy Light

2)



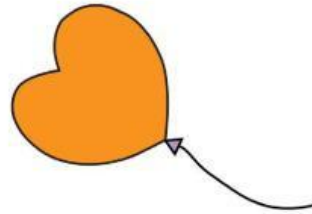
Heavy Light

3)



Heavy Light

4)




Heavy Light

5)



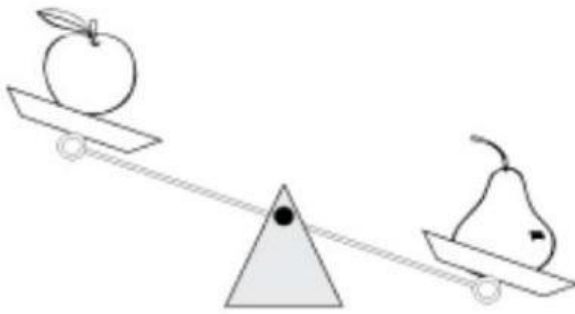
Heavy Light

6)



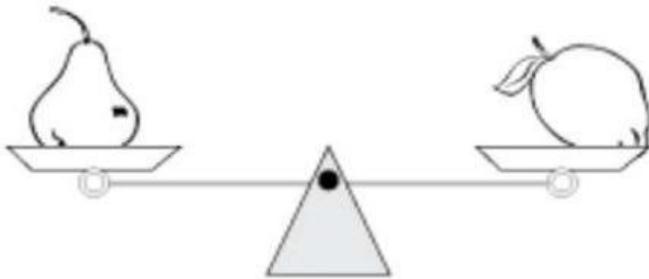
Heavy Light

3. Fill in the missing words. Use the words heavier, lighter, balance.

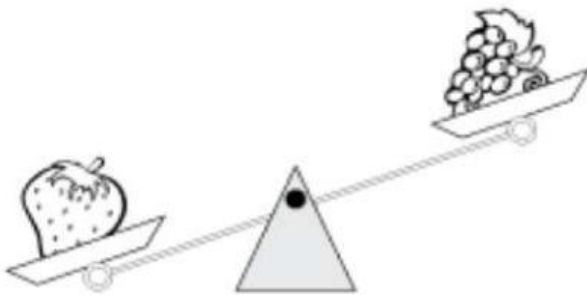


The apple is _____ than the pear.

The pear is _____ than the apple.



The pear and the lemon _____.




The strawberry is _____ than the grapes.

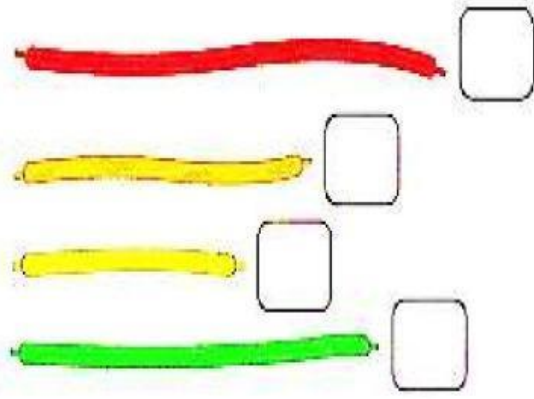
The grapes are _____ than the strawberry.

4. Read and tick (✓) the correct box.


(a) Which is the shortest?




(b) Which is the longest?



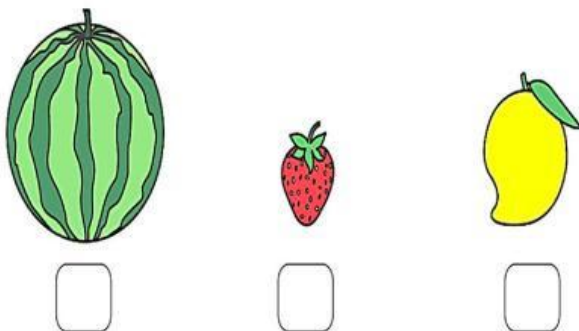
(c) Which is the shortest?




(d) Which is the longest?



(e) Which is the lightest?

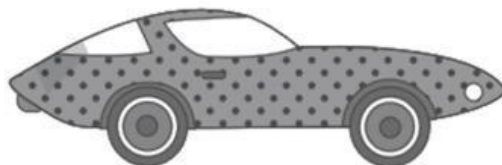
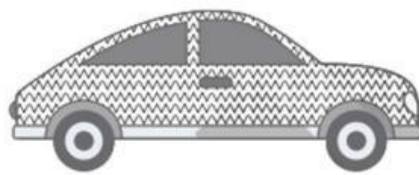
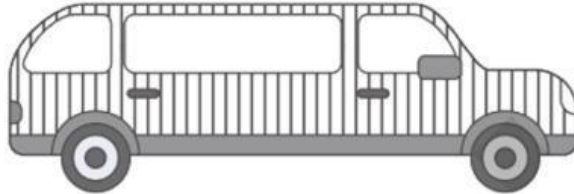


(f) Which is the heaviest?




5. Read and write numbers.

(a) Compare the length of these cars. Label them in order 1 to 5. 1 is the longest car. 5 is the shortest car.



(b) Compare the height of these animals. Label them in order 1 to 5. 1 is the tallest animal. 5 is the shortest animal.



(c) Compare the weight of these types of vegetables. Label them in order 1 to 3. 1 is the heaviest. 3 is the lightest.

