

LKPD

Matematika

Penjumlahan dan Pengurangan



5 + 5 = ?
7 - 2 = ?




The illustration shows two children, a boy and a girl, sitting at a desk. They are both looking thoughtful, with their hands on their chins. A speech bubble above them contains two math problems. The background includes a bulletin board with numbers and a cat, a bookshelf with books, and a water dispenser.

Nama:

Kelas:

Belajar Menghitung

Hitung jumlah hewan-hewan tersebut dengan tepat, lalu tulis jawabannya di kotak!



Belajar Menghitung

Hitung jumlah buah sesuai gambar. Gunakan operasi tambah (+) dan kurang (-), lalu tuliskan jawabannya di kotak!

$$\begin{array}{|c|} \hline \text{1 Pineapple} \\ \hline \end{array} + \begin{array}{|c|} \hline \text{2 Mangoes} \\ \hline \end{array} - \begin{array}{|c|} \hline \text{2 Strawberries} \\ \hline \end{array} = \square$$

$$\begin{array}{|c|} \hline \text{4 Bananas} \\ \hline \end{array} - \begin{array}{|c|} \hline \text{2 Lemons} \\ \hline \end{array} + \begin{array}{|c|} \hline \text{4 Apples} \\ \hline \end{array} = \square$$

$$\begin{array}{|c|} \hline \text{2 Strawberries} \\ \hline \end{array} + \begin{array}{|c|} \hline \text{6 Pineapples} \\ \hline \end{array} - \begin{array}{|c|} \hline \text{2 Mangoes} \\ \hline \end{array} = \square$$

$$\begin{array}{|c|} \hline \text{5 Apples} \\ \hline \end{array} - \begin{array}{|c|} \hline \text{1 Lemon} \\ \hline \end{array} + \begin{array}{|c|} \hline \text{4 Bananas} \\ \hline \end{array} = \square$$

$$\begin{array}{|c|} \hline \text{4 Pineapples} \\ \hline \end{array} + \begin{array}{|c|} \hline \text{4 Bananas} \\ \hline \end{array} - \begin{array}{|c|} \hline \text{4 Apples} \\ \hline \end{array} = \square$$

Ayo Berlatih Hitung Cepat!

Hitung hasil pengurangan di bawah ini. Tulis jawabannya di kotak!

$6 - 4 = \square$

$3 - 2 = \square$

$8 - 5 = \square$

$10 - 5 = \square$

$8 - 3 = \square$

$9 - 5 = \square$