


Есімі


Күні




# КӨБЕЙТУ КЕСТЕСІ

## 6-ҒА


5. Суреттегі заттарды санап, мысалдарды толықтыр.



$$6 = 6 \times \underline{\quad}$$

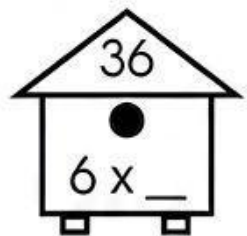
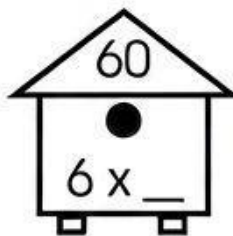
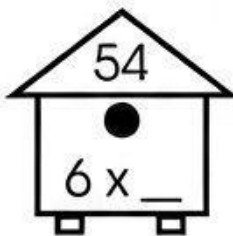
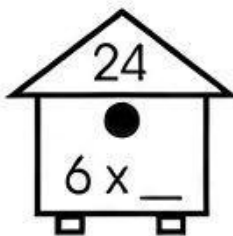
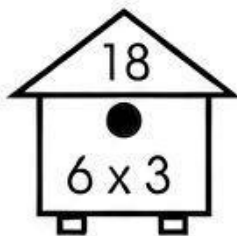


$$6 + 6 = 6 \times \underline{\quad}$$



$$6 + 6 + 6 = 6 \times \underline{\quad}$$

6. 6 санына көбейтінді сандарды тап:



7. Ұяшықтарды толтыр:

