

LEMBAR KERJA PESERTA DIDIK

LKPD

MATEMATIKA



NAMA :


KELAS :


Name: _____


Date: _____


APPLE MATH


TULIS JAWABAN KAMU DI DALAM APEL


$7+1=$ 


$1+2=$ 


$5+3=$ 


$6+2=$ 


$2+0=$ 


$3+4=$ 


$5+0=$ 


$3+1=$ 


$5+2=$ 


$9+0=$ 


$4+4=$ 


$3+4=$ 


$2+4=$ 


$5+5=$ 


$1+3=$ 


$3+1=$ 

$4+6=$ 

$3+4=$ 

$2+6=$ 

$3+3=$ 

$2+6=$ 

Pengurangan dengan Cerita Sederhana



Arahan!

Bacalah soal cerita berikut ini dengan teliti. Tekan area kotak pada jawaban yang benar!

1

Lala memiliki 6 jepit rambut. 3 jepit rambut patah dan tidak bisa dipakai lagi. Berapa sisa jepit rambut Lala yang masih bagus?

A. 3 jepit rambut

B. 2 jepit rambut

C. 5 jepit rambut

2

Pada pohon mangga terdapat 10 buah mangga. Paman memetikanya sebanyak 5 buah. Berapa sisa buah mangga di pohon sekarang?

A. 3 mangga

B. 4 mangga

C. 5 mangga

3

Pada awalnya Tio memiliki 10 kelereng. Lalu 6 kelereng hilang. Berapa sisa kelereng yang dimiliki Tio sekarang?

A. 7 kelereng

B. 8 kelereng

C. 4 kelereng

4

Yudha berencana menjual 8 lukisan hasil karyanya. Lalu seorang seniman membeli 6 lukisan karya Yudha. Berapa sisa lukisan Yudha?

A. 6 lukisan

B. 2 lukisan

C. 8 lukisan

5

Nisa mengerjakan 5 tugas sekolah. Saat ini 4 tugas telah selesai dikerjakan Nisa. Berapa tugas sekolah Nisa yang masih belum selesai?

A. 4 tugas

B. 6 tugas

C. 1 tugas