

# LKPD

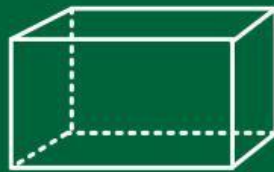
## Matematika

Tema:

Bangun Ruang



### Bangun Ruang

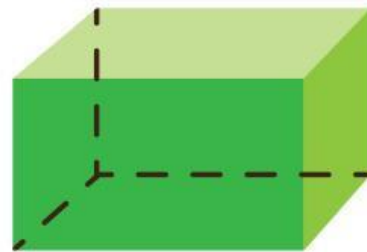

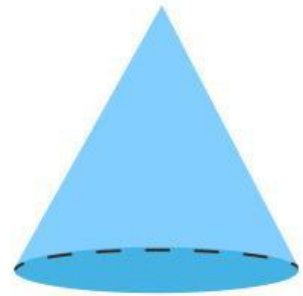

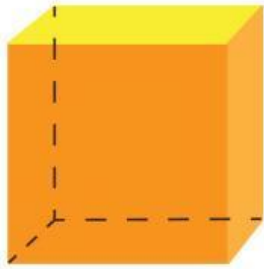


Nama: \_\_\_\_\_

Kelas: \_\_\_\_\_

## Nama nama bangun ruang

Tentukan nama bangun ruang dengan gambar yang tepat



**Kubus**

**Bola**

**Kerucut**

**Tabung**

**Balok**

# Bentuk Benda


Hubungkan benda dengan bentuknya.



Kerucut



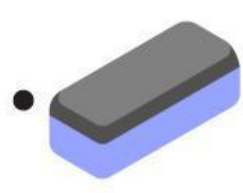
Kubus



Balok






Bola




Tabung



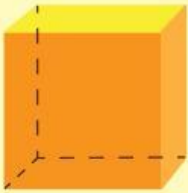



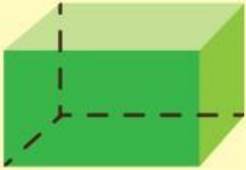
**Gunting gambar berikut ini dan tempelkan  
sesuai bentuk bangun ruangnya**



## Bagian-bagian Bangun Ruang

Tuliskan banyak sisi, sudut, dan rusuk bangun ruang pada tabel di bawah ini.

No	Bangun Ruang	Bagian- bagian
1.		<ul style="list-style-type: none"><li>• Sisi:</li><li>• Sudut:</li><li>• Rusuk:</li></ul>
2.		<ul style="list-style-type: none"><li>• Sisi:</li><li>• Sudut:</li><li>• Rusuk:</li></ul>
3.		<ul style="list-style-type: none"><li>• Sisi:</li><li>• Sudut:</li><li>• Rusuk:</li></ul>
4.		<ul style="list-style-type: none"><li>• Sisi:</li><li>• Sudut:</li><li>• Rusuk:</li></ul>
5.		<ul style="list-style-type: none"><li>• Sisi:</li><li>• Sudut:</li><li>• Rusuk:</li></ul>