

AREA SHEET 3

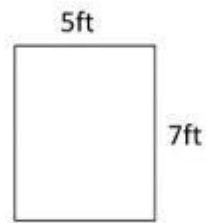
Work out the area of the following rectangles. They are not to scale.

1)



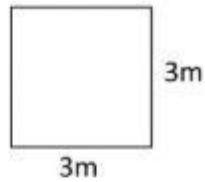
Area = _____ square cm

2)



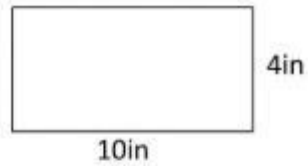
Area = _____ square ft

3)



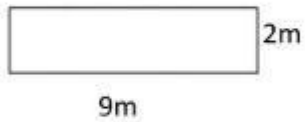
Area = _____ square m

4)



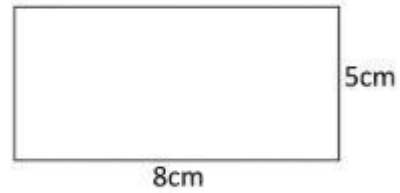
Area = _____ square in

5)



Area = _____ square m

6)



Area = _____ square cm