

LKPD MATEMATIKA

KELAS 3 SEKOLAH DASAR



Nama:

Kelas:
LIVEWORKSHEETS

PUZZLE PERKALIAN

Kerjakanlah operasi hitung perkalian di bawah ini agar kamu dapat menyatukan gambar dengan tepat!

3×3	4×5	5×6	6×2	7×2	8×1	9×2
3×6	4×7	5×8	6×4	7×6	8×2	9×8
3×7	4×8	5×7	6×8	7×8	8×8	9×9
3×9	4×9	5×9	6×9	7×9	8×10	6×10

20 80 30 63 14 8 42

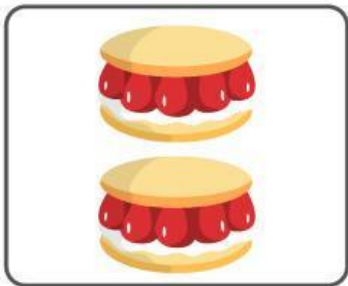
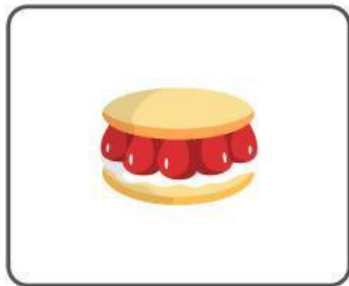
18 32 28 40 24 18 16

35 21 36 54 81 64 56



27 9 72 12 48 45 60



PERKALIAN

Hitung hasil perkalian dari gambar berikut, lalu tuliskan jawabannya di kotak yang tersedia!

 \times  $=$

 \times  $=$

 \times  $=$

 \times  $=$

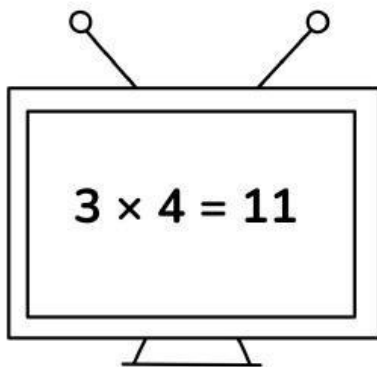
Soal Perkalian Kelas 3

Menemukan Kesalahan Perkalian

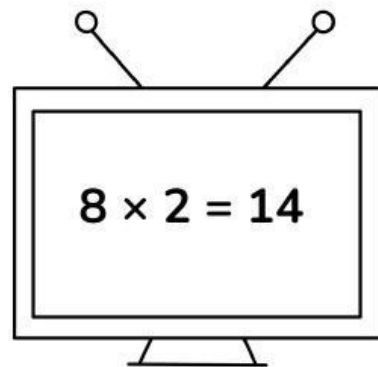


PETUNJUK :

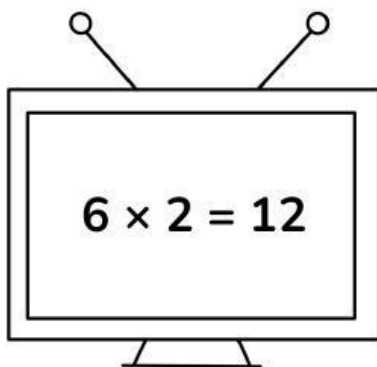
Periksa hasil perkalian berikut. lalu berilah centang di jawaban yang benar dan beri silang di jawaban yang salah.



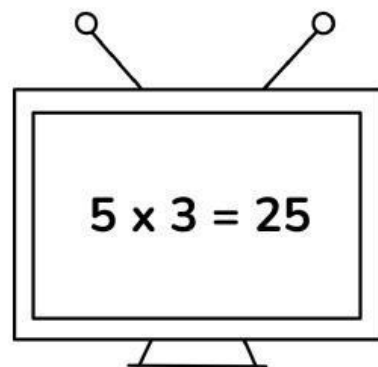
Benar Salah



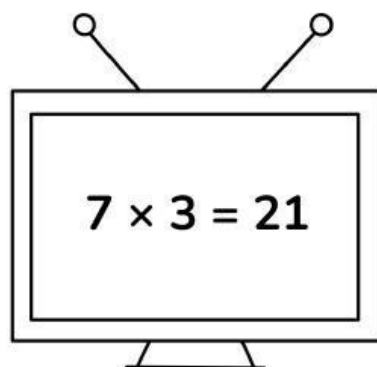
Benar Salah



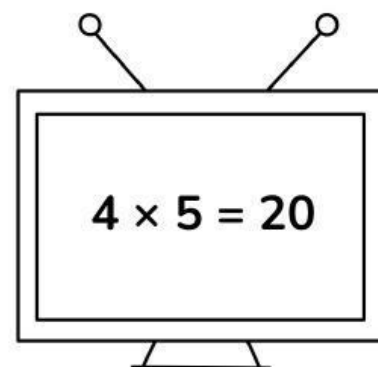
Benar Salah



Benar Salah



Benar Salah



Benar Salah

Sudoku Perkalian

Hitunglah hasil perkalian di bawah ini!

2	×	3	=	<input type="text"/>
×		×		
4	×	3	=	<input type="text"/>
=		=		
<input type="text"/>		<input type="text"/>		

5	×	1	=	<input type="text"/>
×		×		
3	×	6	=	<input type="text"/>
=		=		
<input type="text"/>		<input type="text"/>		

6	×	2	=	<input type="text"/>
×		×		
4	×	7	=	<input type="text"/>
=		=		
<input type="text"/>		<input type="text"/>		

7	×	3	=	<input type="text"/>
×		×		
1	×	9	=	<input type="text"/>
=		=		
<input type="text"/>		<input type="text"/>		

8	×	3	=	<input type="text"/>
×		×		
2	×	5	=	<input type="text"/>
=		=		
<input type="text"/>		<input type="text"/>		

5	×	4	=	<input type="text"/>
×		×		
6	×	4	=	<input type="text"/>
=		=		
<input type="text"/>		<input type="text"/>		