

LKPD MATEMATIKA

KELAS 4 SEKOLAH DASAR



Nama:

Kelas:
 **LIVEWORKSHEETS**

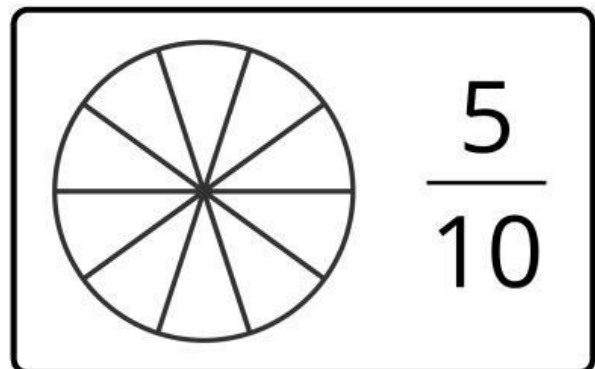
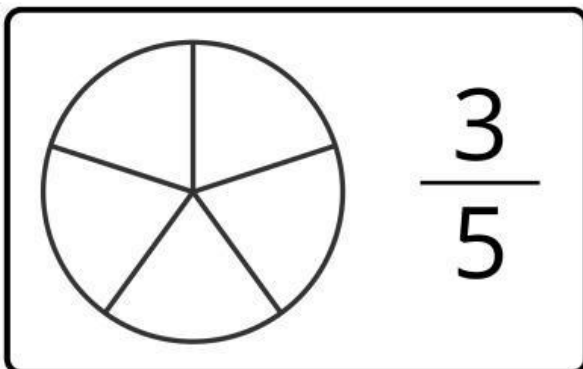
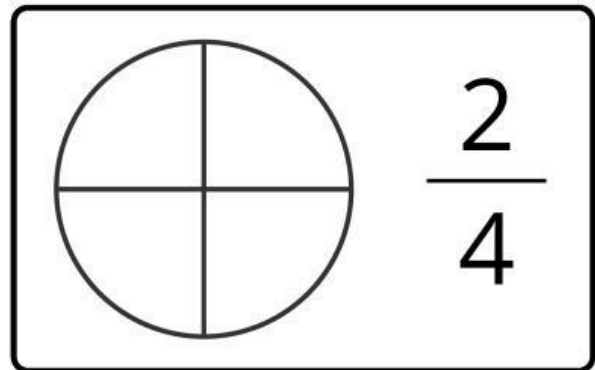
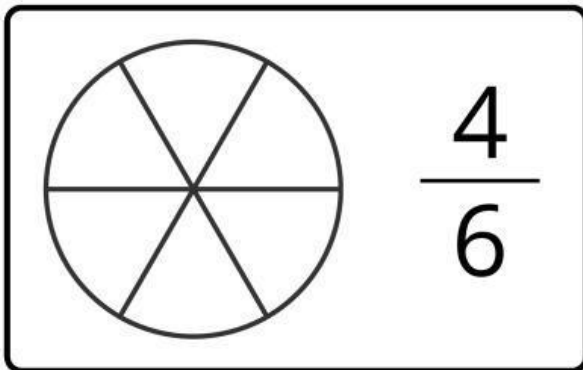
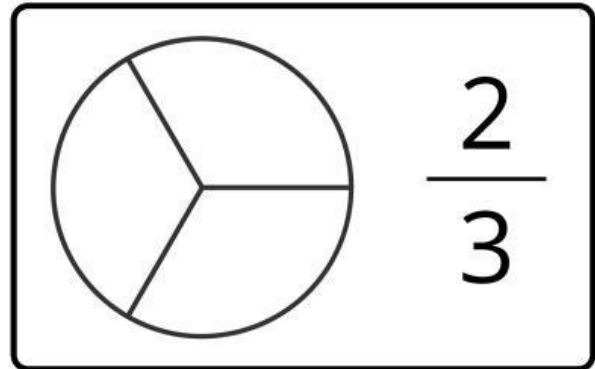
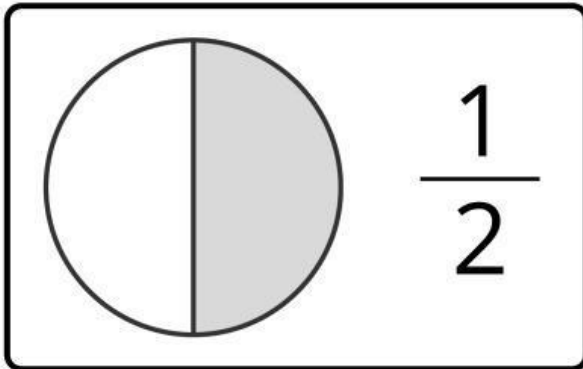
BELAJAR MENENTUKAN PECAHAN



Nama:

Kelas:

Ayo belajar tentang pecahan! Warnai pecahan sesuai dengan nilai pecahan yang tertera dengan tepat.



Nama :

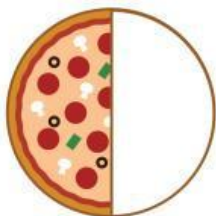
Kelas :

BILANGAN PECAHAN

Pasangkanlah gambar di sebelah kiri dengan bilangan pecahan yang sesuai!



$$\frac{1}{3}$$



$$\frac{3}{6}$$




$$\frac{3}{7}$$



$$\frac{1}{2}$$



$$\frac{1}{9}$$



$$\frac{2}{10}$$