




Al Dhafra Private Academy

Math Ongoing Assessment
Week 7: Term 3

Name: _____ Date: 08-05-2026 Grade/Section: KG2 (A/B/C/D)

Task: Look at the picture and identify if the object is tall, long, or short. /2


1.



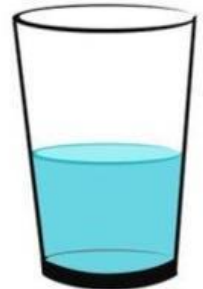


2.



Task: Write 'H' for heavy objects and 'L' for light objects. /2



Task: Match the picture to the correct word. /2



empty

half full

nearly empty

full