

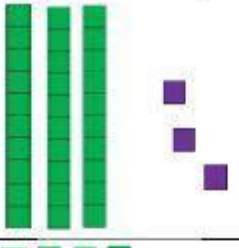




Tens and Ones.

How many tens and ones?

	<table border="1"><thead><tr><th>Tens</th><th>Ones</th></tr></thead><tbody><tr><td>2</td><td>4</td></tr></tbody></table>	Tens	Ones	2	4	<table border="1"><thead><tr><th>Number</th></tr></thead><tbody><tr><td>24</td></tr></tbody></table>	Number	24
Tens	Ones							
2	4							
Number								
24								
	<table border="1"><thead><tr><th>Tens</th><th>Ones</th></tr></thead><tbody><tr><td></td><td></td></tr></tbody></table>	Tens	Ones			<table border="1"><thead><tr><th>Number</th></tr></thead><tbody><tr><td></td></tr></tbody></table>	Number	
Tens	Ones							
Number								
	<table border="1"><thead><tr><th>Tens</th><th>Ones</th></tr></thead><tbody><tr><td></td><td></td></tr></tbody></table>	Tens	Ones			<table border="1"><thead><tr><th>Number</th></tr></thead><tbody><tr><td></td></tr></tbody></table>	Number	
Tens	Ones							
Number								
	<table border="1"><thead><tr><th>Tens</th><th>Ones</th></tr></thead><tbody><tr><td></td><td></td></tr></tbody></table>	Tens	Ones			<table border="1"><thead><tr><th>Number</th></tr></thead><tbody><tr><td></td></tr></tbody></table>	Number	
Tens	Ones							
Number								
	<table border="1"><thead><tr><th>Tens</th><th>Ones</th></tr></thead><tbody><tr><td></td><td></td></tr></tbody></table>	Tens	Ones			<table border="1"><thead><tr><th>Number</th></tr></thead><tbody><tr><td></td></tr></tbody></table>	Number	
Tens	Ones							
Number								