


Dividing into equal groups

Grade 3 Division Worksheet

Divide the food between the kids & write the division equation.




$$\underline{\quad} \div \underline{\quad} = \underline{\quad}$$

How many bananas does each kid get?




$$\underline{\quad} \div \underline{\quad} = \underline{\quad}$$

How many muffins does each kid get?



$$\underline{\quad} \div \underline{\quad} = \underline{\quad}$$


How many pretzels does each kid get?



$$\underline{\quad} \div \underline{\quad} = \underline{\quad}$$

How many cherries does each kid get?

Answers




$$8 \div 4 = 2$$

How many bananas does each kid get? **2**




$$6 \div 2 = 3$$

How many muffins does each kid get? **3**



$$6 \div 3 = 2$$

How many pretzels does each kid get? **2**



$$12 \div 4 = 3$$

How many cherries does each kid get? **3**