

# Released Form

Published February 2026

## Grade 3 Mathematics

### North Carolina End-of-Grade Assessment



**Public Schools of North Carolina**

Department of Public Instruction | State Board of Education

Division of Accountability Services/North Carolina Testing Program

Copyright © 2026 by the North Carolina Department of Public Instruction. All rights reserved.

LIVEWORKSHEETS

RELEASED

In compliance with federal law, the NC Department of Public Instruction administers all state-operated educational programs, employment activities, and admissions without discrimination because of race, religion, national or ethnic origin, color, age, military service, disability, or gender, except where exemption is appropriate and allowed by law.

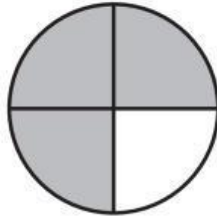
**Inquiries or complaints regarding discrimination issues should be directed to:**

Thomas Tomberlin, Senior Director, Office of Educator Preparation and Teacher Licensure, NCDPI  
6301 Mail Service Center, Raleigh, NC 27699-6301 / Phone: (984) 236-2114/ Fax: (984) 236-2099

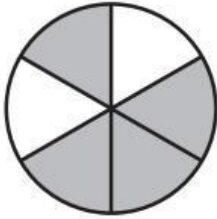
**Visit us on the Web:** [www.dpi.nc.gov](http://www.dpi.nc.gov)



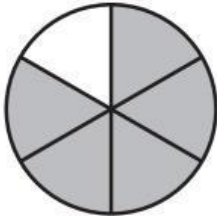
1 Which circle has the same amount shaded as this figure?



A



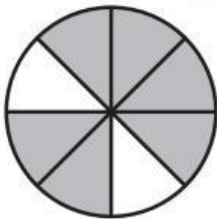
B



C



D



Go to the next page.

These materials are NCDPI copyrighted and cannot be used for personal or financial gain or uploaded into third-party applications.



2 Savion has trouble remembering the product of  $6 \times 9$ . Which is another way for Savion to solve this multiplication problem?

- A  $6 \times 4 + 6 \times 5$
- B  $6 \times 6 + 6 \times 9$
- C  $9 \times 6 + 6 \times 9$
- D  $9 \times 3 + 6 \times 9$

3 What value for  $d$  makes this equation correct?

$$7 = d \div 3$$

- A 4
- B 10
- C 21
- D 28

4 What is the distance between  $X$  and  $Y$  on this number line?



- A  $\frac{1}{3}$
- B  $\frac{2}{3}$
- C  $\frac{3}{2}$
- D  $\frac{3}{1}$



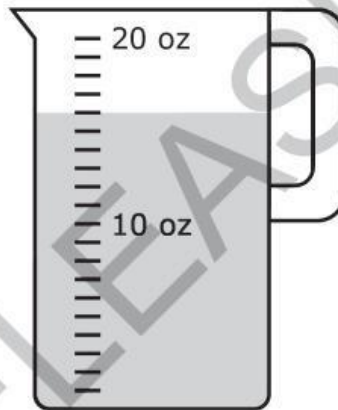
Go to the next page.



5 There are 32 students sitting at tables in the lunchroom. There are 2 tables that have 10 students each. The other students are sitting at an extra table. Which equation can be used to find the number of students,  $s$ , sitting at the extra table?

- A  $2 + 10 + 32 = s$
- B  $2 \times 10 + 32 = s$
- C  $s + 2 + 10 = 32$
- D  $2 \times 10 + s = 32$

6 Four friends drank equal shares of the fruit juice in this container.



How much fruit juice did each friend get?

- A 6 oz
- B 5 oz
- C 4 oz
- D 3 oz



Go to the next page.

These materials are NCDPI copyrighted and cannot be used for personal or financial gain or uploaded into third-party applications.



- 7 David drove on a road trip:
- 198 miles on the first day, and
  - 134 miles on the second day.

How many miles did David drive over both days, rounded to the nearest ten?

- A 310 miles
- B 320 miles
- C 330 miles
- D 340 miles

- 8 Sue used 42 apples to make pies. Six apples were needed to make one pie. How many pies did Sue make?

- A 8
- B 6
- C 9
- D 7

RELEASED



Go to the next page.

These materials are NCDPI copyrighted and cannot be used for personal or financial gain or uploaded into third-party applications.



- 9 In this equation, the  $\Delta$  represents a number.

$$7 \times \Delta = 63$$

In which choice does the  $\Delta$  represent the same number?

- A  $63 \div 7 = \Delta$   
 B  $7 \div \Delta = 63$   
 C  $7 \div 63 = \Delta$   
 D  $\Delta \div 7 = 63$
- 10 Matt will put all of his cards into his card book.

- He has 81 baseball cards.
- Each page of the book holds 9 cards.

What is the fewest number of pages Matt can use to put all of his cards into the book?

- A 8  
 B 9  
 C 10  
 D 11

RELEASED



Go to the next page.

These materials are NCDPI copyrighted and cannot be used for personal or financial gain or uploaded into third-party applications.



11 Which fraction has a value of 4?

- A  $\frac{1}{4}$
- B  $\frac{1}{3}$
- C  $\frac{4}{4}$
- D  $\frac{16}{4}$

12 A plane flew 336 miles on Monday and 476 miles on Tuesday. **Approximately** how many miles did the plane fly, rounded to the nearest hundred?

- A 700 miles
- B 730 miles
- C 800 miles
- D 830 miles

RELEASED



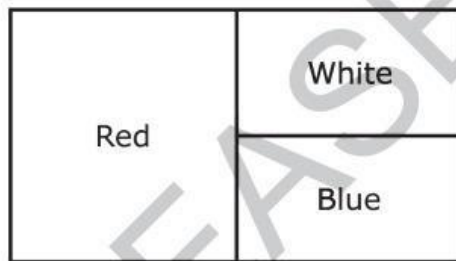
Go to the next page.

These materials are NCDPI copyrighted and cannot be used for personal or financial gain or uploaded into third-party applications.



- 13 Erin and her four friends have 45 pencils. They will share them equally. How many pencils will each friend get?
- A 9
  - B 8
  - C 7
  - D 6

- 14 Ryan wants to paint one of his walls with red paint, white paint, and blue paint, as shown.



What fraction of the wall will be painted blue?

- A  $\frac{1}{6}$
- B  $\frac{1}{4}$
- C  $\frac{1}{3}$
- D  $\frac{1}{2}$



Go to the next page.

These materials are NCDPI copyrighted and cannot be used for personal or financial gain or uploaded into third-party applications.



15 What number makes this equation true?

$$9 \times \triangle = 72$$

- A 6
- B 7
- C 8
- D 9

16 There are 40 rows of seats in a theater. There are 9 seats in each row. How many seats are in the theater?

- A 49 seats
- B 130 seats
- C 360 seats
- D 380 seats

RELEASED




Go to the next page.

These materials are NCDPI copyrighted and cannot be used for personal or financial gain or uploaded into third-party applications.



17 Sara will shade 2 parts of each circle below. Which circle will have  $\frac{1}{3}$  shaded?

A



B



C



D



18 Melvin planted 24 flowers in 4 equal rows. Which number sentence finds out how many plants,  $p$ , are in each row?

A  $24 \div 4 = p$

B  $4 \div p = 24$

C  $24 \times 4 = p$

D  $p \times 24 = 4$

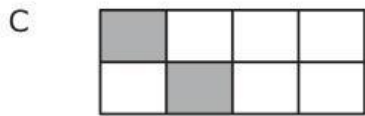


Go to the next page.

These materials are NCDPI copyrighted and cannot be used for personal or financial gain or uploaded into third-party applications.



19 Which model is  $\frac{1}{4}$  shaded?



20 Adam has 49 cards and James has 28 cards. How many more cards are needed for them to have 111 cards altogether?

- A 34 cards
- B 36 cards
- C 44 cards
- D 46 cards

RELEASED



These materials are NCDPI copyrighted and cannot be used for personal or financial gain or uploaded into third-party applications.



This is the end of the calculator inactive test questions.

Directions:

1. Look back over your answers for the calculator inactive questions. You will not be able to go back and work on these questions once you are given a calculator.
2. Make sure all your answers are entered appropriately in your book.
3. Raise your hand to let your teacher know you are ready to begin the calculator active test questions.
4. Do not begin work on the calculator active test questions until your teacher has given you a calculator.

RELEASED



These materials are NCDPI copyrighted and cannot be used for personal or financial gain or uploaded into third-party applications.



21 A multiplication chart is shown.

<b>X</b>	<b>1</b>	<b>2</b>	<b>3</b>	<b>4</b>	<b>5</b>	<b>6</b>	<b>7</b>	<b>8</b>	<b>9</b>	<b>10</b>
<b>1</b>	1	2	3	4	5	6	7	8	9	10
<b>2</b>	2	4	6	8	10	12	14	16	18	20
<b>3</b>	3	6	9	12	15	18	21	24	27	30
<b>4</b>	4	8	12	16	20	24	28	32	36	40
<b>5</b>	5	10	15	20	25	30	35	40	45	50
<b>6</b>	6	12	18	24	30	36	42	48	54	60
<b>7</b>	7	14	21	28	35	42	49	56	63	70
<b>8</b>	8	16	24	32	40	48	56	64	72	80
<b>9</b>	9	18	27	36	45	54	63	72	81	90
<b>10</b>	10	20	30	40	50	60	70	80	90	100

Which statement is always true and is illustrated by the shaded portion of the chart?

- A The product of two even numbers is divisible by 6.
- B The product of two odd numbers is odd.
- C The product of an even number and an odd number is odd.
- D The product of two odd numbers is divisible by 5.



Go to the next page.

These materials are NCDPI copyrighted and cannot be used for personal or financial gain or uploaded into third-party applications.



- 22 There are 7 parking spaces in each row of a parking lot. There are 8 rows. A total of 39 parking spaces are full. How many parking spaces are empty?
- A 10
  - B 13
  - C 15
  - D 17
- 23 A rectangular bedroom is 12 feet long and 10 feet wide. What is the perimeter of the bedroom?
- A 22 feet
  - B 44 feet
  - C 100 feet
  - D 120 feet

RELEASED



Go to the next page.

These materials are NCDPI copyrighted and cannot be used for personal or financial gain or uploaded into third-party applications.