


Họ và tên: _____


Ngày: _____

1. Điền số còn thiếu vào ô trống


$$7 + \square = 10$$



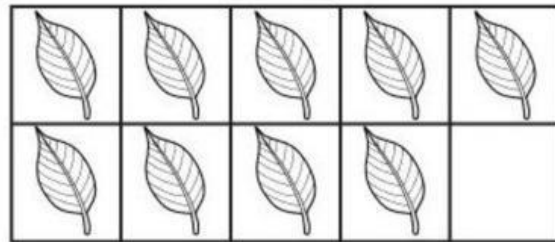
$$5 + \square = 10$$




$$2 + \square = 10$$



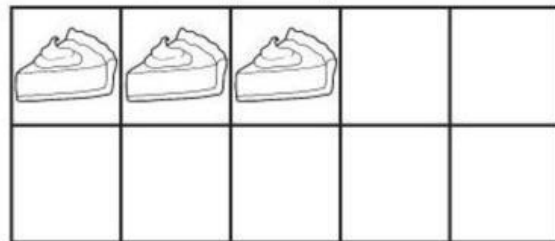
$$9 + \square = 10$$




$$4 + \square = 10$$




$$3 + \square = 10$$



$$6 + \square = 10$$



$$8 + \square = 10$$



2. Điền số còn thiếu vào ô trống



$$3 + \square = 6$$



$$4 + \square = 7$$



$$2 + \square = 4$$



$$3 + \square = 8$$



$$5 + \square = 6$$



$$4 + \square = 8$$



$$6 + \square = 10$$



$$4 + \square = 9$$



$$1 + \square = 5$$