

Họ và tên: _____

Ngày: _____

1. Trong các hình dưới đây hình nào là hình lập phương ?

























2. Khoanh vào số lớn nhất trong mỗi nhóm

16 18 20 11

15 17 19 18

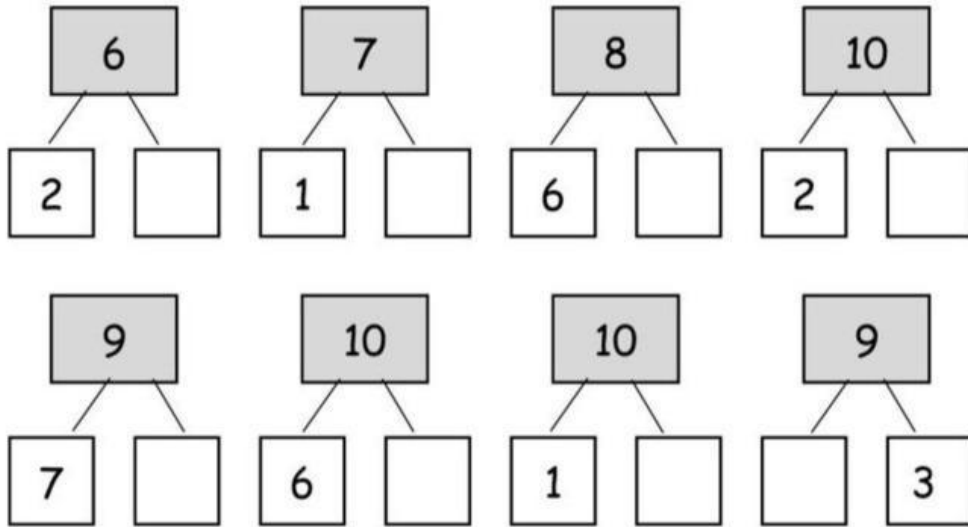
20 11 17 15

10 13 16 18

14 13 16 18

19 14 20 15

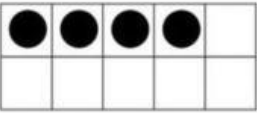
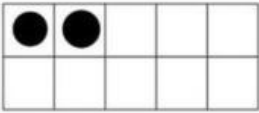

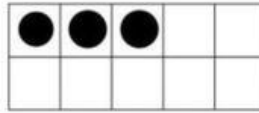
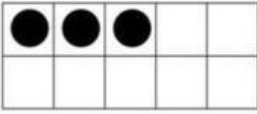
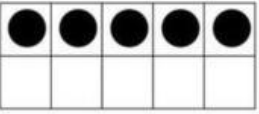
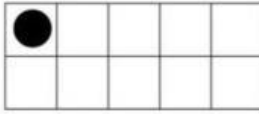

3. Hoàn thành sơ đồ liên kết



4. Thực hiện phép tính

$\begin{array}{r} 7 \\ - 5 \\ \hline \end{array}$	$\begin{array}{r} 7 \\ - 3 \\ \hline \end{array}$	$\begin{array}{r} 7 \\ - 1 \\ \hline \end{array}$	$\begin{array}{r} 8 \\ - 2 \\ \hline \end{array}$	$\begin{array}{r} 5 \\ - 0 \\ \hline \end{array}$	$\begin{array}{r} 6 \\ - 3 \\ \hline \end{array}$
$\begin{array}{r} 3 \\ - 3 \\ \hline \end{array}$	$\begin{array}{r} 4 \\ - 0 \\ \hline \end{array}$	$\begin{array}{r} 5 \\ - 1 \\ \hline \end{array}$	$\begin{array}{r} 5 \\ - 4 \\ \hline \end{array}$	$\begin{array}{r} 5 \\ - 2 \\ \hline \end{array}$	$\begin{array}{r} 5 \\ - 3 \\ \hline \end{array}$

5. Điền số còn thiếu

 $4 + \boxed{} = 10$	 $2 + \boxed{} = 10$	 $4 + \boxed{} = 10$	 $3 + \boxed{} = 10$
 $3 + \boxed{} = 10$	 $5 + \boxed{} = 10$	 $1 + \boxed{} = 10$	 $5 + \boxed{} = 10$