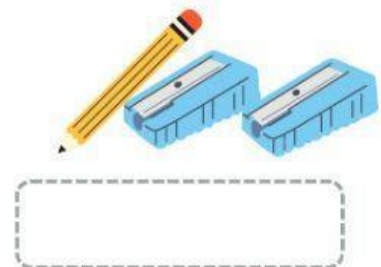
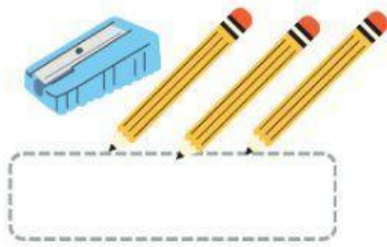
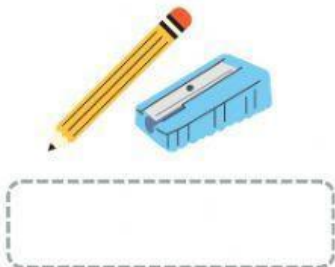
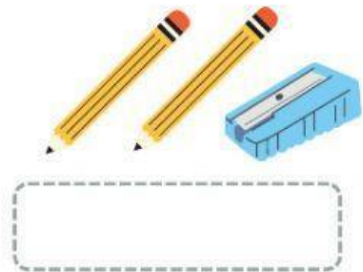
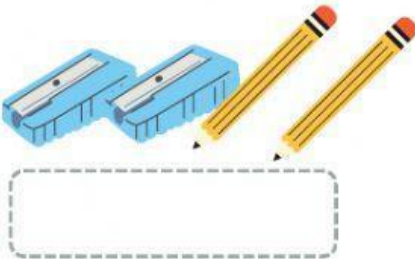



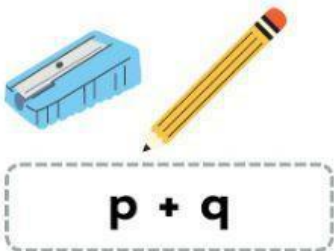


Nama : \_\_\_\_\_




# Bentuk Aljabar

Yok, lengkapi kotak dibawah dan isi kotak tersebut dengan bentuk aljabar.




# ALJABAR MATH




Jodohkanlah bentuk aljabar ini dengan gambar sebelah kiri

$2x + 3y$



$x + 3y$



$x + y$



$3x + 2y$



$2x + 2y$



: x



: y



Mari beri nama bentuk aljabar dibawah ini sesuai dengan unsur bentuk aljabar

