

Unit 2: Adding and Subtracting (Within 10) -

Interactive Practice Worksheet

Instructions: Answer all the questions. Show your work where needed. Have fun learning! 🎉

➕ SECTION 1: UNDERSTANDING ADDITION

Count and add the objects:

1: 🍎 🍎 + 🍎 🍎 🍎 = _____ 2: ★ ★ ★ + ★ ★ = _____

3: 🍷 🍷 🍷 + 🍷 = _____ 4: 🐛 🐛 + 🐛 🐛 🐛 🐛 = _____

5: 🌻 + 🌻 🌻 🌻 = _____ 6: 🍕 🍕 🍕 + 🍕 🍕 = _____

Write the addition sentence:

7: 🎁 🎁 and 🎁 🎁 🎁 = _____ + _____ = _____

8: 🚗 🚗 🚗 and 🚗 = _____ + _____ = _____

9: 🍪 🍪 and 🍪 🍪 🍪 🍪 = _____ + _____ = _____

Addition on a number line:

10: Start at 2, count on 3 more. Where do you land? Answer: _____

11: Start at 1, count on 4 more. Where do you land? Answer: _____

12: Start at 3, count on 2 more. Where do you land? Answer: _____

SECTION 2: KEY ADDITION FACTS (UP TO 10)

Solve the addition facts:

13: $2 + 1 = \underline{\quad}$

14: $3 + 2 = \underline{\quad}$

15: $4 + 1 = \underline{\quad}$

16: $2 + 3 = \underline{\quad}$

17: $5 + 2 = \underline{\quad}$

18: $3 + 3 = \underline{\quad}$

19: $4 + 2 = \underline{\quad}$

20: $1 + 5 = \underline{\quad}$

21: $2 + 4 = \underline{\quad}$

Doubles (same number added twice):

22: $1 + 1 = \underline{\quad}$

23: $2 + 2 = \underline{\quad}$

24: $3 + 3 = \underline{\quad}$

25: $4 + 4 = \underline{\quad}$

26: $5 + 5 = \underline{\quad}$

Making 10 (number bonds):

27: $1 + \underline{\quad} = 10$

28: $2 + \underline{\quad} = 10$

29: $3 + \underline{\quad} = 10$

30: $4 + \underline{\quad} = 10$

31: $5 + \underline{\quad} = 10$

32: $6 + \underline{\quad} = 10$


33: $7 + \underline{\quad} = 10$


34: $8 + \underline{\quad} = 10$


35: $9 + \underline{\quad} = 10$

— SECTION 3: UNDERSTANDING SUBTRACTION


Cross out and subtract:

36:  (cross out 2) = $\underline{\quad}$ left

37:  (cross out 1) = $\underline{\quad}$ left

38:  (cross out 3) = $\underline{\quad}$ left

39:  (cross out 2) = $\underline{\quad}$ left

40:  (cross out 1) = $\underline{\quad}$ left

41:  (cross out 4) = $\underline{\quad}$ left

Write the subtraction sentence:

42:  take away  = $\underline{\quad} - \underline{\quad} = \underline{\quad}$

43:  take away  = $\underline{\quad} - \underline{\quad} = \underline{\quad}$

44:  take away  = $\underline{\quad} - \underline{\quad} = \underline{\quad}$

Subtraction on a number line:

45: Start at 7, count back 2. Where do you land? Answer: _____

46: Start at 6, count back 3. Where do you land? Answer: _____

47: Start at 9, count back 4. Where do you land? Answer: _____

 SECTION 4: KEY SUBTRACTION FACTS (WITHIN 10)

Solve the subtraction facts:

48: $3 - 1 =$ _____ 49: $5 - 2 =$ _____ 50: $4 - 1 =$ _____

51: $6 - 3 =$ _____ 52: $7 - 2 =$ _____ 53: $8 - 3 =$ _____

54: $9 - 4 =$ _____ 55: $10 - 5 =$ _____ 56: $7 - 1 =$ _____

57: $8 - 2 =$ _____ 58: $9 - 3 =$ _____ 59: $10 - 4 =$ _____

Use addition to help with subtraction:

60: If $3 + 2 = 5$, then $5 - 2 =$ _____

61: If $4 + 3 = 7$, then $7 - 3 =$ _____

62: If $2 + 5 = 7$, then $7 - 5 =$ _____

63: If $4 + 4 = 8$, then $8 - 4 =$ _____

64: If $3 + 6 = 9$, then $9 - 6 =$ _____

65: If $5 + 5 = 10$, then $10 - 5 =$ _____

SECTION 5: FACT FAMILIES (ADDITION & SUBTRACTION)

Complete the fact family:

66: Numbers: 2, 3, 5

$2 + 3 = \underline{\quad}$ $3 + 2 = \underline{\quad}$ $5 - 2 = \underline{\quad}$ $5 - 3 = \underline{\quad}$

67: Numbers: 1, 4, 5

$1 + 4 = \underline{\quad}$ $4 + 1 = \underline{\quad}$ $5 - 1 = \underline{\quad}$ $5 - 4 = \underline{\quad}$

68: Numbers: 3, 4, 7

$3 + 4 = \underline{\quad}$ $4 + 3 = \underline{\quad}$ $7 - 3 = \underline{\quad}$ $7 - 4 = \underline{\quad}$

69: Numbers: 2, 6, 8

$2 + 6 = \underline{\quad}$ $6 + 2 = \underline{\quad}$ $8 - 2 = \underline{\quad}$ $8 - 6 = \underline{\quad}$

70: Numbers: 4, 5, 9

$4 + 5 = \underline{\quad}$ $5 + 4 = \underline{\quad}$ $9 - 4 = \underline{\quad}$ $9 - 5 = \underline{\quad}$

SECTION 6: WORD PROBLEMS

Solve the word problems:

71: 🍏 Maria has 3 apples. Her friend gives her 2 more apples. How many apples does Maria have now?

Answer: _____ apples

72: 🎈 There are 7 balloons. 3 balloons pop. How many balloons are left?

Answer: _____ balloons

73: ★ Tom has 4 stars. He gets 3 more stars. How many stars does he have in total?

Answer: _____ stars

74: 🌻 There are 8 flowers in a garden. 2 flowers are picked. How many flowers are left?

Answer: _____ flowers

75: 🐝 There are 5 bees. 2 more bees come. How many bees are there now?

Answer: _____ bees

76: 🍕 Sarah has 9 pizza slices. She eats 4 slices. How many slices are left?

Answer: _____ slices

77: 🎁 There are 6 gifts. 1 more gift arrives. How many gifts are there now?

Answer: _____ gifts

78: 🚗 There are 10 cars. 5 cars drive away. How many cars are left?

Answer: _____ cars

🎉 **Excellent work! You completed all 78 questions!** 🎉