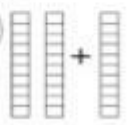

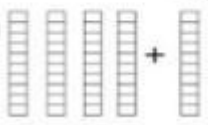



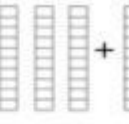

Student's Name: _____ Date: _____





10 Adding Ten 10

1.  +  = _____

2.  +  = _____

3.  +  = _____

4.  +  = _____

5. $50 + 10 = \square$ $80 + 10 = \square$

$10 + 10 = \square$ $70 + 10 = \square$

