

PRACTICE TEST 2, 2025 – 2026

MATHS – GRADE 4 | Time: 35 minutes

Full Name:		MARK
Class:	School:	

SECTION 1

Listen and choose the correct answer. The audio will be played twice.

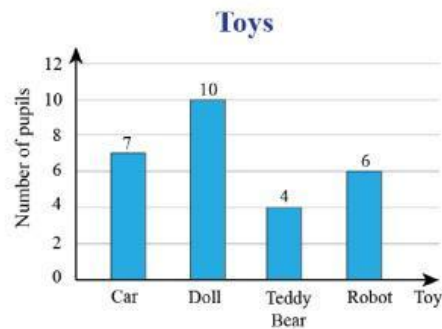
- 1) What is the mentioned number?
 A. 452 300 818 B. 440 300 126 C. 420 070 120
- 2) What is the mentioned addition?
 A. $4\ 000\ 000 + 2\ 000\ 000 = 6\ 000\ 000$
 B. $3\ 000\ 000 + 3\ 000\ 000 = 6\ 000\ 000$
 C. $5\ 000\ 000 + 2\ 000\ 000 = 7\ 000\ 000$
- 3) Which day does Lily sell the most number of candies?
 A. Monday B. Tuesday C. Wednesday
- 4) What is the mentioned expression?
 A. $6 - m \times 8$ B. $5 : m + 10$ C. $5 : m \times 3$
- 5) What is the value of the expression?
 A. 18 B. 28 C. 38

SECTION 2

Choose the correct answer.

- 6) It is number thirty-three million four hundred thousand eight hundred and fifteen.
 A. 53 100 455 B. 23 900 405 C. 33 400 815

7) How many pupils have dolls as their toys?



A. 7

B. 10

C. 6

8) Which of the following is a multiplication?

A. $440\ 000 : 10 = 44\ 000$

B. $44\ 000 + 5\ 000 = 49\ 000$

C. $44\ 000 \times 5 = 220\ 000$

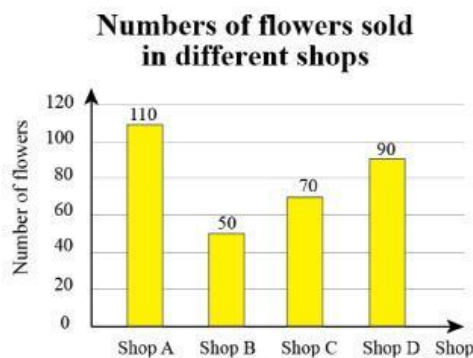
9) School A has one thousand and two hundred students. On Children's day, each student in school A will receive three new pencils. The total number of pencils the students have is three thousand and six hundred. What is the mentioned multiplication?

A. $1\ 200 \times 3 = 3\ 600$

B. $1\ 000 \times 3 = 3\ 000$

C. $1\ 000 \times 2 = 2\ 000$

10) In the bar chart, the _____ axis represents the number of flowers.

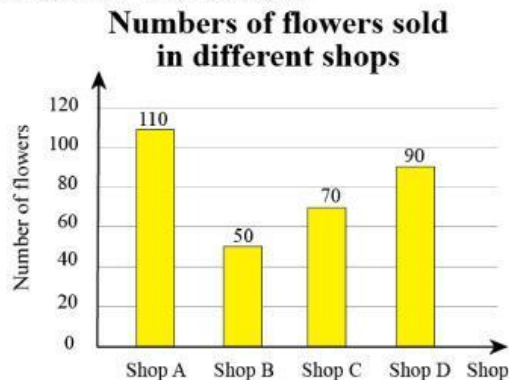


A. vertical

B. horizontal

C. centre

- 11) Last year, company A produced 4 468 335 cakes. This year, company A produces 1 150 129 cakes. How many fewer cakes did the company produce in this year than in last year?
- A. 3 100 056
B. 3 318 206
C. 3 902 846
- 12) In the expression $25 + a - b$, 25 is a _____.
- A. value
B. number
C. letter
- 13) Sam has ten million VND. He wants to share them equally among his two children. The amount of money each child will receive is five million VND. What is the mentioned division?
- A. $10\ 000\ 000 : 2 = 5\ 000\ 000$
B. $12\ 000\ 000 : 2 = 6\ 000\ 000$
C. $16\ 000\ 000 : 4 = 4\ 000\ 000$
- 14) Which shop sells more than 100 flowers?



- A. shop B
B. shop A
C. shop C
- 15) Jane is 155 cm tall. Her mom is 160 cm tall and her dad is 180 cm tall. What is the mean height of Jane's family?
- A. 160 cm
B. 165 cm
C. 155 cm

SECTION 3

Fill in each blank with the correct WORD or NUMBER.

16) Fill in the blank with ONLY ONE WORD.

In the expression $65 \times a + b$, b is a _____.

17) Fill in the blank with ONLY ONE NUMBER.

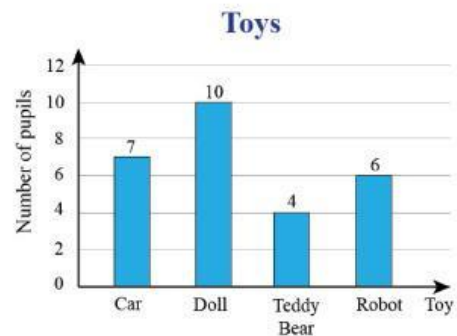
Given expression $20 - c + d$. When $c = 4$, $d = 2$, the value of the expression is _____.

18) Fill in the blank with ONLY ONE WORD.

The number of cars in town A is fifty-five thousand. The number of cars in town B is eighty-six thousand. To find how many more cars in town B than in town A, we take the number of cars in town B _____ the number of cars in town A. The answer is thirty-one thousand.

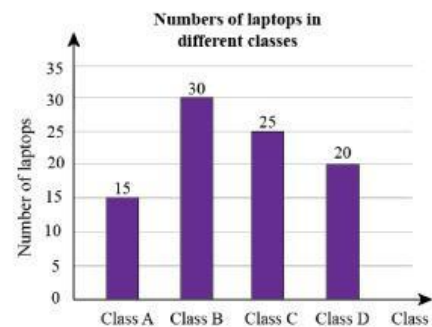
19) Fill in the blank with ONLY ONE WORD.

In the bar chart, the _____ axis represents the type of toys.



20) Fill in the blank with ONLY ONE WORD.

In the bar chart, the number of laptops in class C is _____ than that in class A.



_____ **This is the end of the test.** _____