




3-DIGIT ADDITION PROBLEMS SHEET 2

- 1)  There are 384 cats in an animal rescue shelter. 176 more cats are brought into the shelter. How many cats in the shelter now?


There are _____ cats in the shelter now.

- 2)  Frazer watches two films back-to-back. The first film lasts 127 minutes. The second film lasts 96 minutes. How long does he spend watching the films?


He spends _____ minutes watching the films.

- 3)  Sally and Quadra have a spider catching contest. Sally catches 476 spiders. Quadra catches 349 spiders. How many spiders have they caught altogether?


They catch _____ spiders altogether.

- 4)  Captain is putting up a fence. He puts up 752 feet of fence in the first day. He puts up 528 feet in the second day. How much fence has he put up so far?

He has put up _____ feet of fence so far.

- 5)  A flock of 846 bats take to the sky. Another 485 bats join the flock. How many bats in all?

There are _____ bats in all.

- 6)  Sally is climbing a mountain. She climbs 786 feet in one ascent and another 492 feet in a second ascent. How far has she climbed?

 *She has climbed a total of _____ feet.*