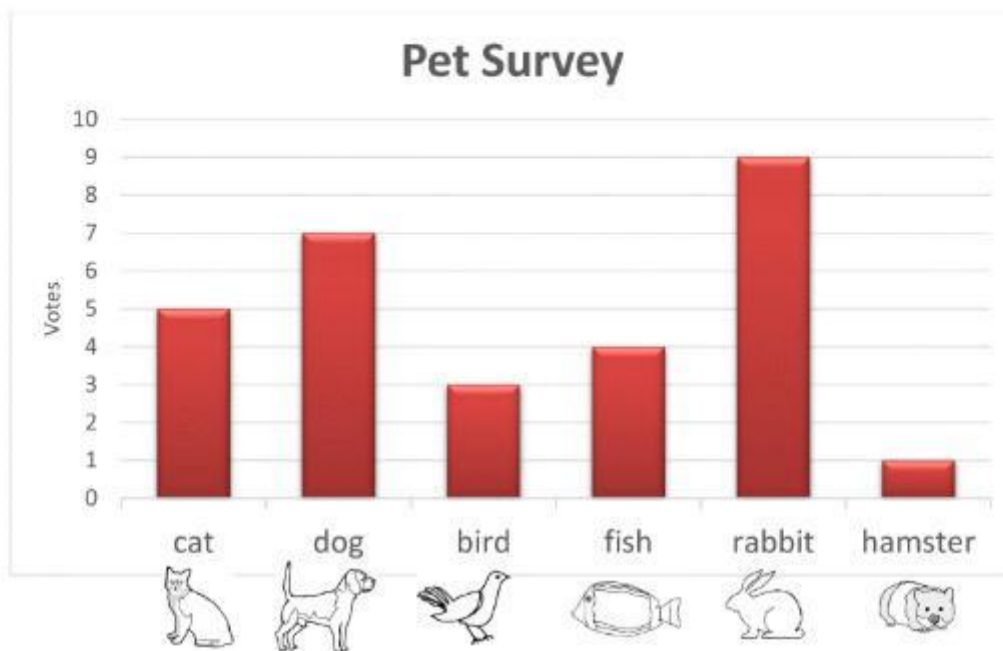






## BAR GRAPHS SHEET 1B - PET SURVEY


The children in Salamander Class had a vote on their cutest pet.




1) Which pet got the most votes? \_\_\_\_\_

2) How many votes did the dog get? \_\_\_\_\_ 

3) How many votes did the fish get? \_\_\_\_\_ 

4) How many votes did the hamster get? \_\_\_\_\_ 

5) How many votes did the bird get? \_\_\_\_\_ 

6) How many votes did the cat get? \_\_\_\_\_ 