


# LE FRAZIONI


- SCEGLI la frazione corrispondente alle parti colorate di ogni figura geometrica.



$$\frac{1}{2}$$

$$\frac{2}{3}$$


$$\frac{2}{4}$$



$$\frac{1}{3}$$

$$\frac{3}{4}$$


$$\frac{1}{2}$$



$$\frac{2}{4}$$

$$\frac{3}{5}$$

$$\frac{1}{4}$$



$$\frac{2}{3}$$

$$\frac{1}{3}$$

$$\frac{1}{2}$$