




## Work It Out

1. Put 24 oranges equally into 4 baskets. How many oranges are there in each basket?



$$24 \div 4 =$$

There are  oranges in each basket.

2. Share 50 stickers equally among 5 children. How many stickers does each child get?



$$50 \div 5 =$$

Each child gets  stickers.




3. Pour 100 g of salt equally into 10 bowls. How many grams of salt are there in each bowl?



There are  g of salt in each bowl.

4. 80 chairs are arranged equally in 10 rows. How many chairs are there in each row?

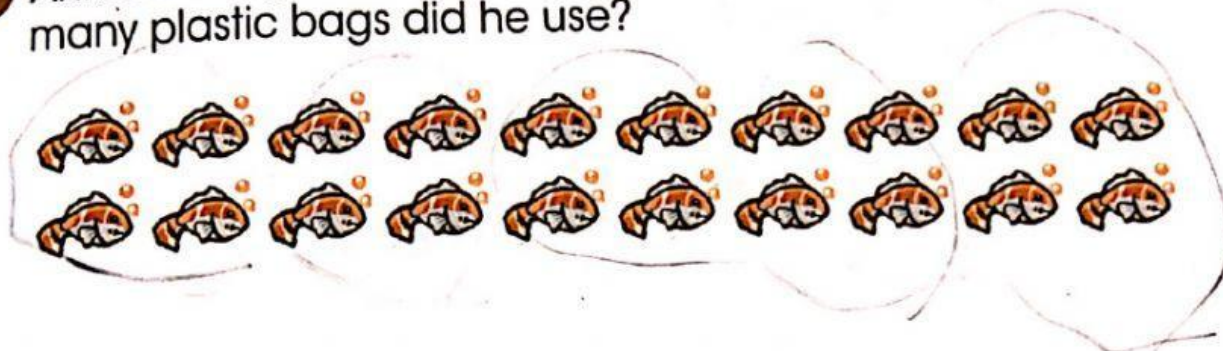


There are  chairs in each row.

# Worksheet 7

## Word problems

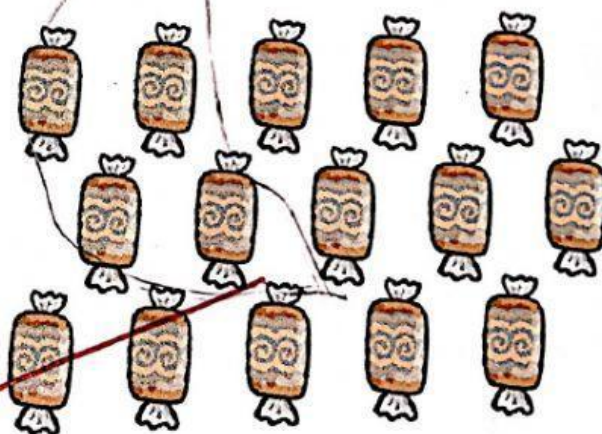
- 1 Ahmad caught 20 fish. He put 4 fish in each plastic bag. How many plastic bags did he use?



$$20 \div 4 = \boxed{5}$$

He used  plastic bags.

- 2 Pei Pei bought 15 sweets for her 5 friends. Each of her friends got an equal number of sweets. How many sweets did each friend get?




$$\boxed{15} \div \boxed{5} = \boxed{3}$$

Each friend got  sweets.


Discover Maths





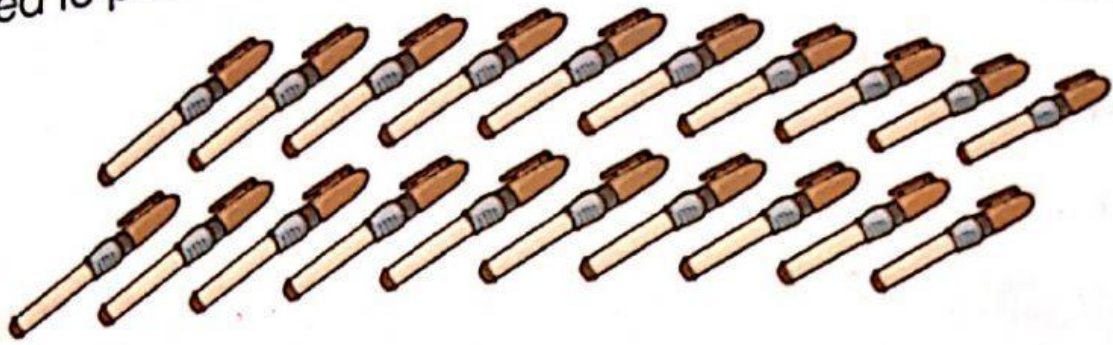
There are  birds on each tree.

- 4 Lisa had 20 cherries. She put 5 cherries on each cake she baked. How many cakes did she bake?



She baked  cakes.

- 5 Mr Ang puts 10 pens in each box. How many boxes does he need to put 20 pens?



He needs  boxes to put 20 pens.

- 6 Miss Kumar used 40 m of ribbon to tie 10 gift hampers. She used the same length of ribbon for each hamper. How many metres of ribbon did she use for each hamper?

She used  m of ribbon for each hamper.