

2025-2026

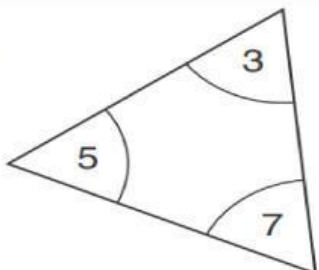
Math Department/ Term 3

Grade 2 / Gifted worksheet

Objective: Use place value to compare numbers

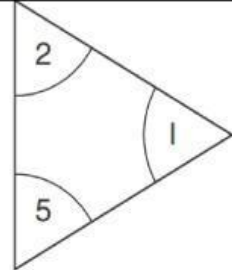
Use the digits in the triangles. Write the greatest number or smallest number that will make each comparison true.

1.



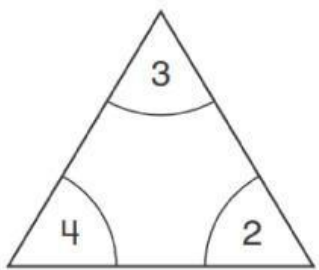
_____ > 375

3.



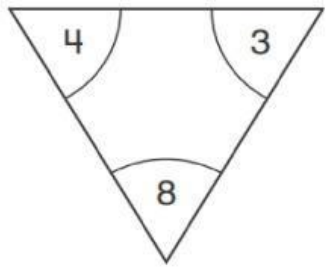
215 < _____

4.



_____ < 342

8.



843 > _____

Our Vision: To create an outstanding and creative educational environment which empowers students to achieve their potential and to become life-long learners and future leaders.