

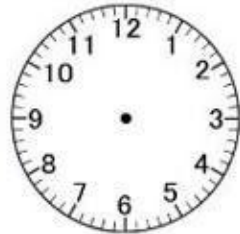


Lembar Kerja Peserta Didik

Bidang Studi : Matematika

Gambarlah waktu sesuai dengan kegiatan!


Nama : _____




Belajar di rumah pukul 04.00 sore




Bermain di rumah pukul 03.00 sore




Makan siang pukul 12.00 siang




Mandi sore pukul 05.00 sore



Pergi ke sekolah pukul 07.00 pagi



Bangun pagi pukul 06.00 pagi



Tidur malam pukul 09.00 malam

