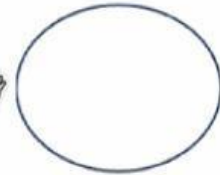



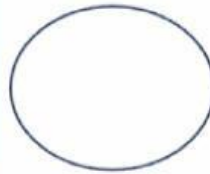
Share the balls between the 2 boys.



___ shared between ___ is ___

$$\underline{\quad} \div \underline{\quad} = \underline{\quad}$$

Share the cherries between the 2 circles.



___ shared between ___ is ___

$$\underline{\quad} \div \underline{\quad} = \underline{\quad}$$

I have 8 books. I share them equally with Anna and Ali.

How many books will each person get?
