





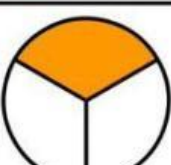
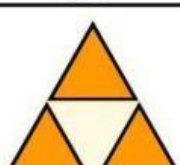
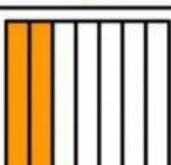


Nama : _____

Kelas : _____

PECAHAN

Lingkari pecahan yang sesuai dengan bagian yang diarsir pada setiap bentuk dari pilihan yang tersedia.

| | | | | | | |
|----|---|---------------|---------------|---------------|---------------|---------------|
| 1) |  | $\frac{1}{6}$ | $\frac{3}{4}$ | $\frac{2}{4}$ | $\frac{3}{6}$ | $\frac{2}{6}$ |
| 2) |  | $\frac{2}{7}$ | $\frac{3}{8}$ | $\frac{4}{7}$ | $\frac{1}{5}$ | $\frac{5}{7}$ |
| 3) |  | $\frac{3}{5}$ | $\frac{4}{5}$ | $\frac{5}{6}$ | $\frac{3}{5}$ | $\frac{4}{6}$ |
| 4) |  | $\frac{6}{8}$ | $\frac{5}{6}$ | $\frac{6}{4}$ | $\frac{5}{8}$ | $\frac{4}{6}$ |
| 5) |  | $\frac{1}{6}$ | $\frac{2}{6}$ | $\frac{2}{7}$ | $\frac{3}{6}$ | $\frac{2}{5}$ |
| 6) |  | $\frac{3}{8}$ | $\frac{2}{6}$ | $\frac{3}{3}$ | $\frac{2}{8}$ | $\frac{3}{6}$ |
| 7) |  | $\frac{1}{2}$ | $\frac{2}{3}$ | $\frac{1}{3}$ | $\frac{2}{2}$ | $\frac{2}{4}$ |
| 8) |  | $\frac{3}{4}$ | $\frac{1}{3}$ | $\frac{2}{3}$ | $\frac{2}{4}$ | $\frac{3}{3}$ |
| 9) |  | $\frac{4}{8}$ | $\frac{5}{7}$ | $\frac{2}{8}$ | $\frac{3}{7}$ | $\frac{2}{7}$ |