


















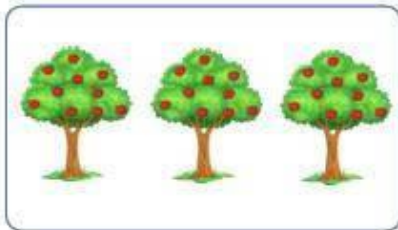

**Bài 3. Điền số thích hợp vào ô trống.**

a) 10; ; 30; ; ; ; 70; ; .

b) 90; ; ; ; 50; ; 30; ; 10.

c) ; ; 70; ; ; 40; ; 20; 10.

**Bài 4. Điền số quả táo có trong mỗi hình. Biết mỗi cây có 10 táo.**



**Bài 5. Điền số thích hợp vào ô trống.**

