


Name: \_\_\_\_\_

KG: \_\_\_\_\_ Date: \_\_\_\_\_


## How many?

1 Fill in the missing numbers.



How many numbers are missing?

2 Point to the group you think shows 10. Count to check.

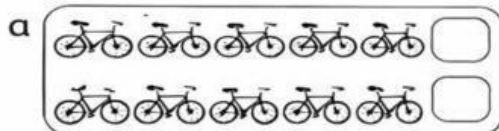


I count  stars.

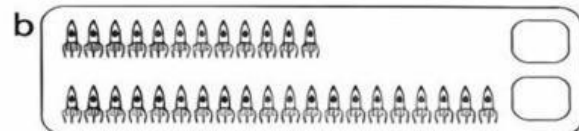


I count **10** stars.

3 Tick (✓) the group that shows the larger number each time.



I count  stars.



I count **10** stars.

3 Write the larger number each time.

