

Mathematics Review

Complete: $\frac{1}{8} = \frac{\quad}{24}$

1.

2 hours =

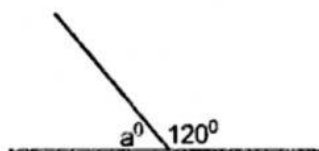
2.

_____ minutes

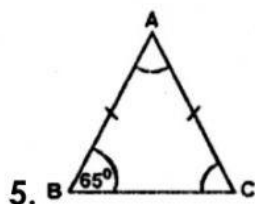
Write in figures:

Fifteen thousand and twenty eight.

3.



4. $a^\circ =$



5.

B 65° C

Triangle ABC is isosceles.
What is the size of angle A?

6. Complete the following

875 = _____ hundreds + 17 tens + 5 ones

643 = 6 hundreds + 3 tens + _____ ones

7. Solve the following

$$\frac{5}{6} - \frac{1}{4} = \underline{\hspace{2cm}}$$

$$8 \times \frac{3}{9} = \underline{\hspace{2cm}}$$

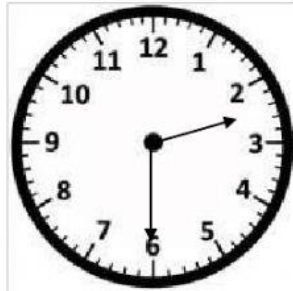
8. Round 487 to the nearest hundred.

9. Arrange in order of biggest to smallest.

$$\frac{3}{4}, \frac{5}{12}, \frac{1}{3}, \frac{4}{5}$$


10. Calculate the least number of marbles that can be placed exactly in groups of 3, 4 and 9.

11. Write the time shown in words and in figures



Words : _____

Figures: _____



Words: _____

Figures: _____