



Class: _____

Grade 3 Math Test End Term 1

1. Write the number in words

- a) 23 _____
- b) 275 _____
- c) 130 _____

2. Answer the questions with 'Yes' or 'No'

a) Start at 0, count in 5s.

Will you say **25**? _____

b) Start at 0, count in 2s.

Will you say **13**? _____

c) Start at 0, count in 10s.

Will you say **90**? _____

3. Answer the multiplication questions

a) A car can carry 5 people. How many people can fit in 3 cars?

b) There are 10 students, 3 chickens, 2 dogs, and 2 teachers. How many legs are there?

c) Teacher Hugo is 1 metre tall. A giraffe is 4 times taller. How tall is a giraffe?

d) There were 15 people at a party. They ordered 10 Bánh Tráng Nướng to be delivered. They cut each Bánh Tráng into 4 slices. How many slices of Bánh Tráng Nướng are there?

4. Teacher Nhung is 150cm tall.

Teacher Loan is 165cm tall.

Teacher Tam is 170cm tall.

Teacher Thao is 180cm tall.

a) How much taller is teacher Thao than teacher Nhung?

b) How much taller is teacher Tam than teacher Loan?

c) What is the total of teacher Thao and Teacher Tam's height together?

d) What is the total height of teacher Nhung, Loan, Tam, and Thao together?

5. What shape can you see?

rectangle


octagon

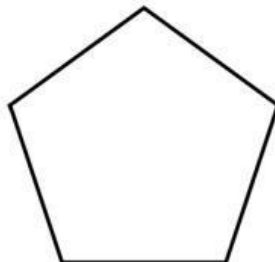
square

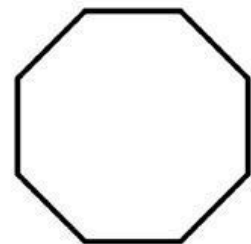
hexagon

heptagon

pentagon

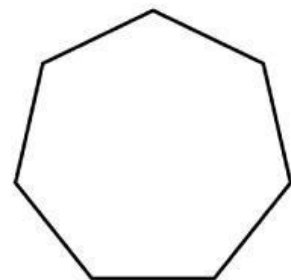












End